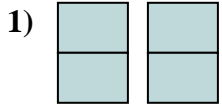


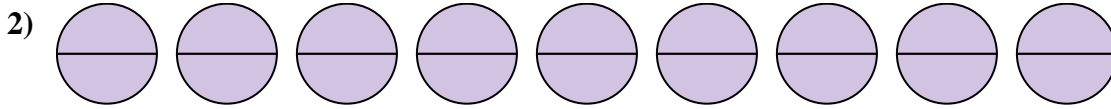


Express the amount shown as a fraction.

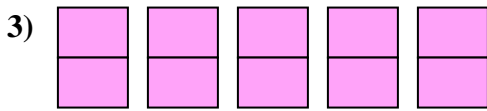
Answers



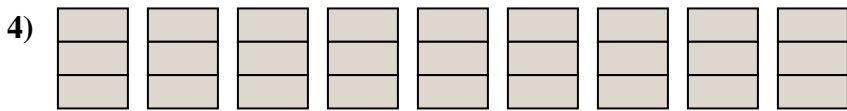
1. \_\_\_\_\_



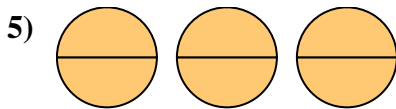
2. \_\_\_\_\_



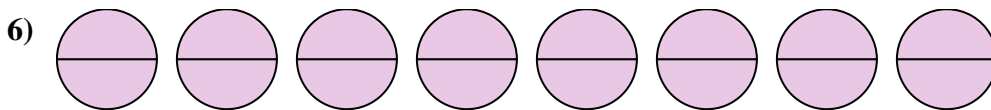
3. \_\_\_\_\_



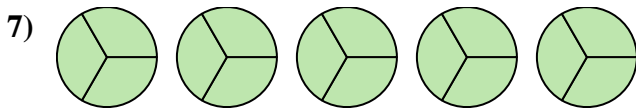
4. \_\_\_\_\_



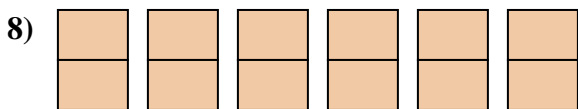
5. \_\_\_\_\_



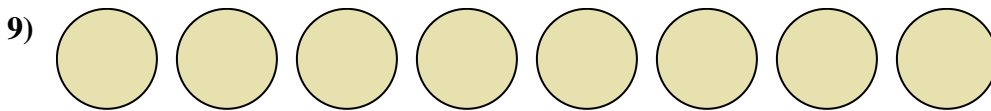
6. \_\_\_\_\_



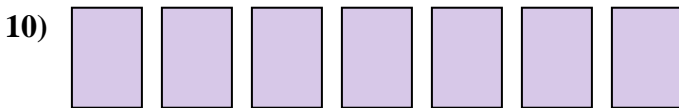
7. \_\_\_\_\_



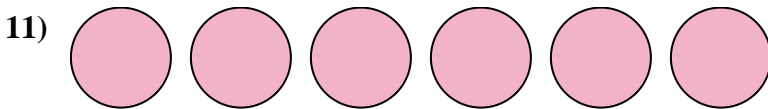
8. \_\_\_\_\_



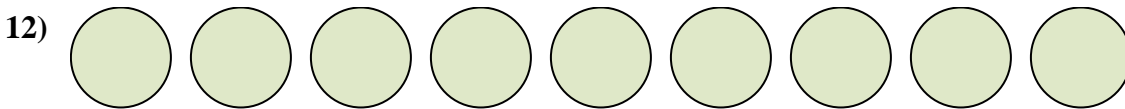
9. \_\_\_\_\_



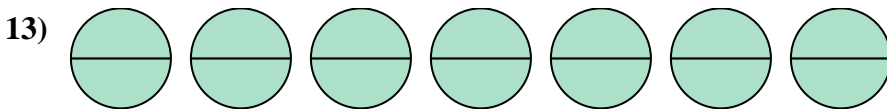
10. \_\_\_\_\_



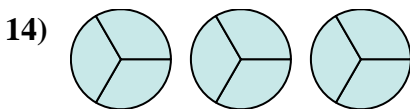
11. \_\_\_\_\_



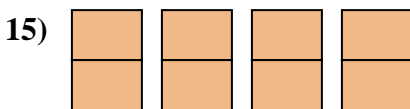
12. \_\_\_\_\_



13. \_\_\_\_\_



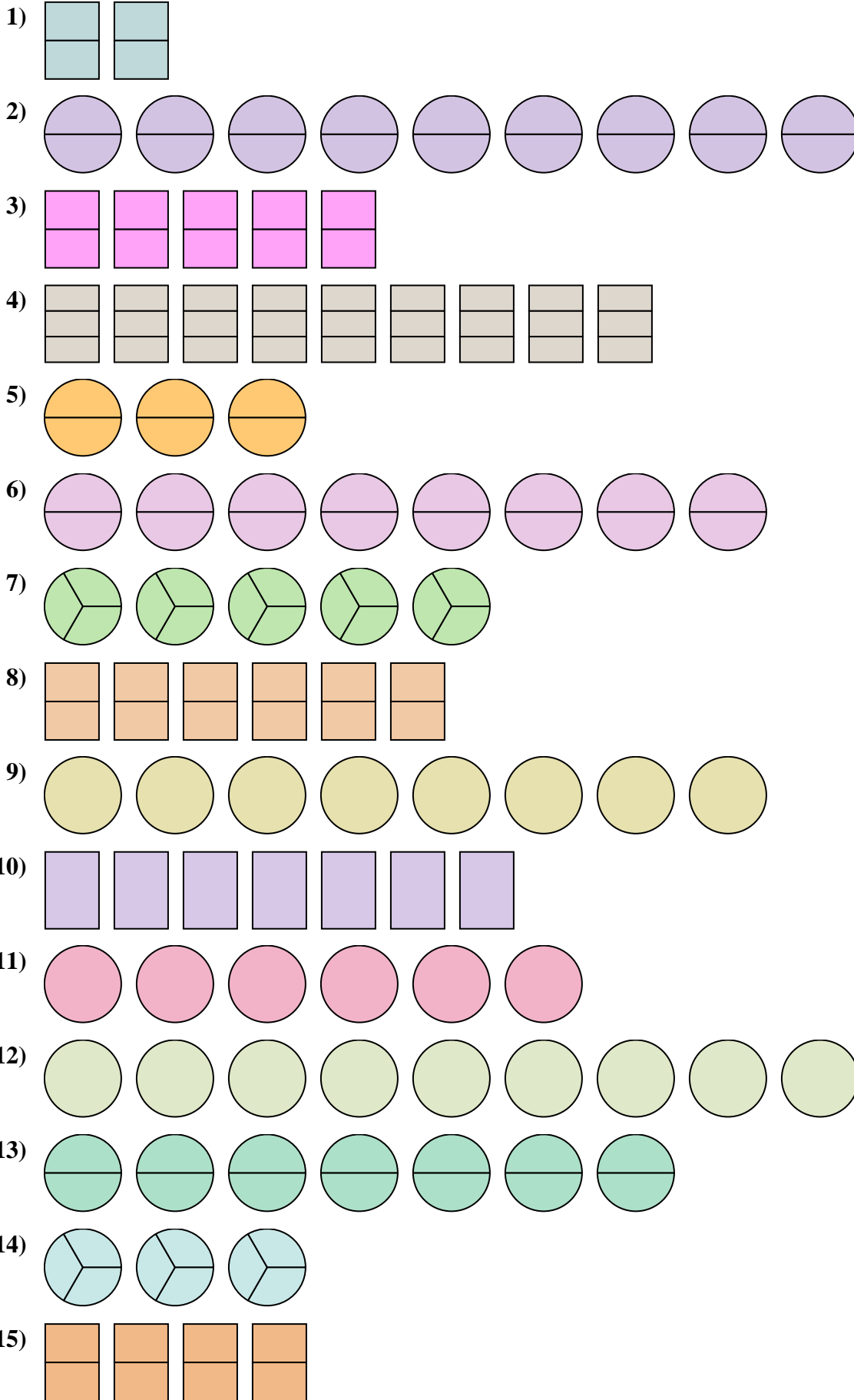
14. \_\_\_\_\_



15. \_\_\_\_\_



Express the amount shown as a fraction.



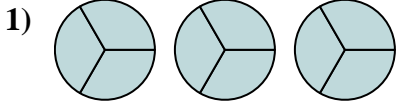
Answers

1.  $\frac{4}{2}$
2.  $\frac{18}{2}$
3.  $\frac{10}{2}$
4.  $\frac{27}{3}$
5.  $\frac{6}{2}$
6.  $\frac{16}{2}$
7.  $\frac{15}{3}$
8.  $\frac{12}{2}$
9.  $\frac{8}{1}$
10.  $\frac{7}{1}$
11.  $\frac{6}{1}$
12.  $\frac{9}{1}$
13.  $\frac{14}{2}$
14.  $\frac{9}{3}$
15.  $\frac{8}{2}$

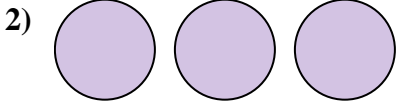


Express the amount shown as a fraction.

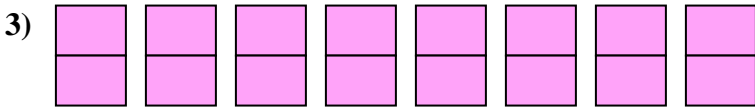
Answers



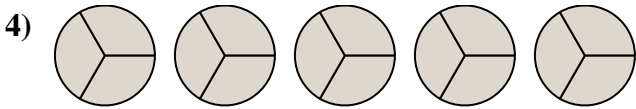
1. \_\_\_\_\_



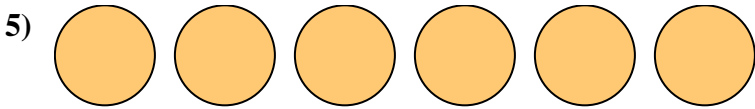
2. \_\_\_\_\_



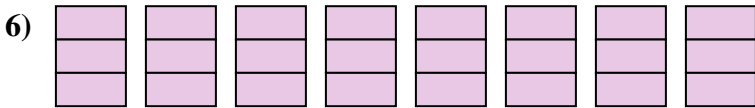
3. \_\_\_\_\_



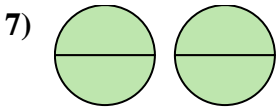
4. \_\_\_\_\_



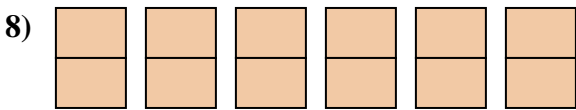
5. \_\_\_\_\_



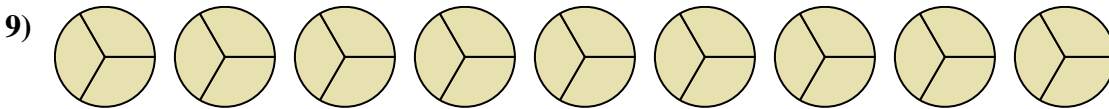
6. \_\_\_\_\_




7. \_\_\_\_\_



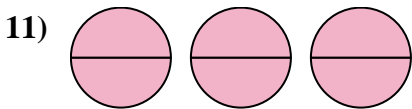
8. \_\_\_\_\_



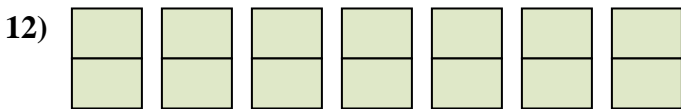
9. \_\_\_\_\_



10. \_\_\_\_\_



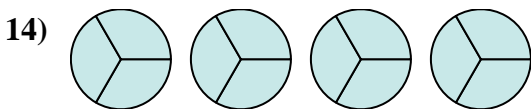
11. \_\_\_\_\_



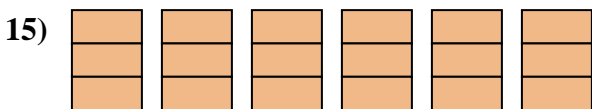
12. \_\_\_\_\_



13. \_\_\_\_\_



14. \_\_\_\_\_



15. \_\_\_\_\_



Express the amount shown as a fraction.

- 1)
- 2)
- 3)
- 4)
- 5)
- 6)
- 7)
- 8)
- 9)
- 10)
- 11)
- 12)
- 13)
- 14)
- 15)

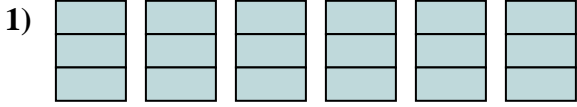
Answers

1.  $\frac{9}{3}$
2.  $\frac{3}{1}$
3.  $\frac{16}{2}$
4.  $\frac{15}{3}$
5.  $\frac{6}{1}$
6.  $\frac{24}{3}$
7.  $\frac{4}{2}$
8.  $\frac{12}{2}$
9.  $\frac{27}{3}$
10.  $\frac{8}{1}$
11.  $\frac{6}{2}$
12.  $\frac{14}{2}$
13.  $\frac{2}{1}$
14.  $\frac{12}{3}$
15.  $\frac{18}{3}$

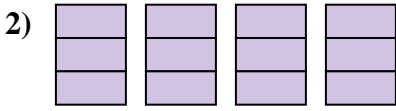


Express the amount shown as a fraction.


Answers



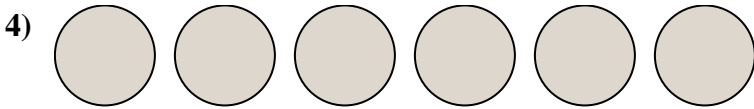
1. \_\_\_\_\_



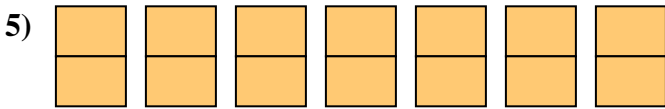
2. \_\_\_\_\_



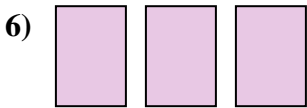
3. \_\_\_\_\_



4. \_\_\_\_\_



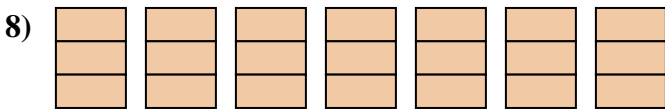
5. \_\_\_\_\_



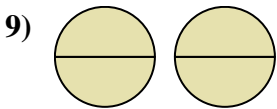
6. \_\_\_\_\_



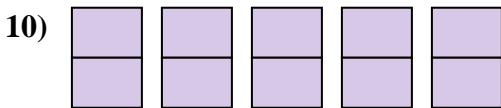
7. \_\_\_\_\_



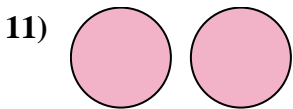
8. \_\_\_\_\_



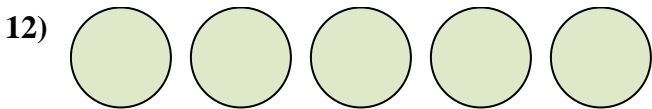
9. \_\_\_\_\_



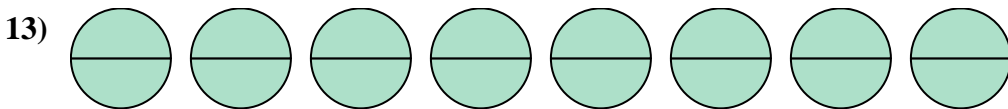
10. \_\_\_\_\_



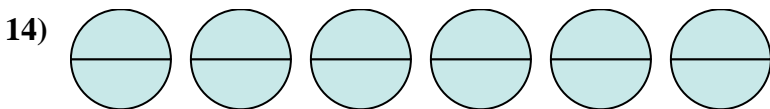
11. \_\_\_\_\_



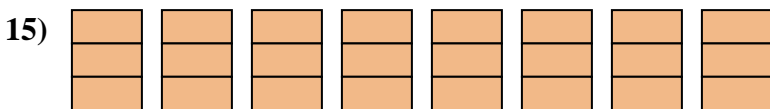
12. \_\_\_\_\_



13. \_\_\_\_\_



14. \_\_\_\_\_



15. \_\_\_\_\_



Express the amount shown as a fraction.

- 1)
- 2)
- 3)
- 4)
- 5)
- 6)
- 7)
- 8)
- 9)
- 10)
- 11)
- 12)
- 13)
- 14)
- 15)

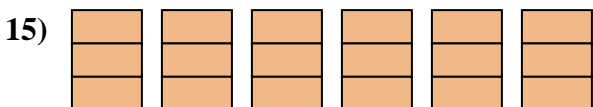
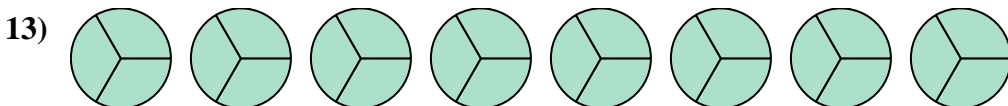
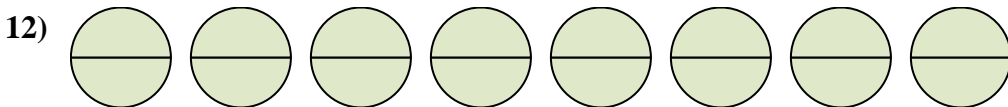
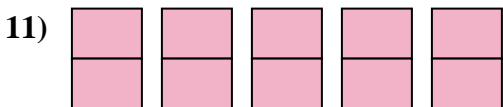
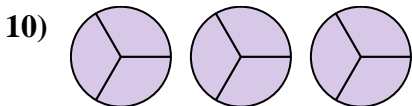
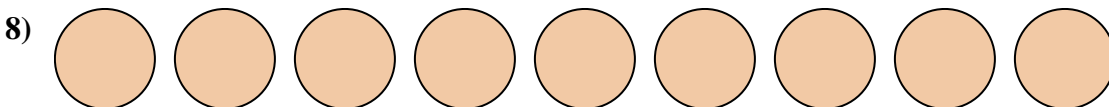
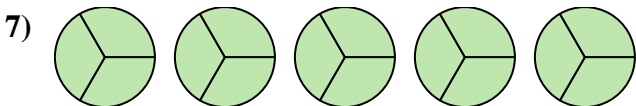
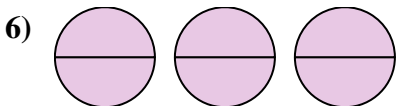
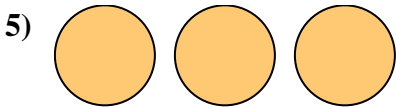
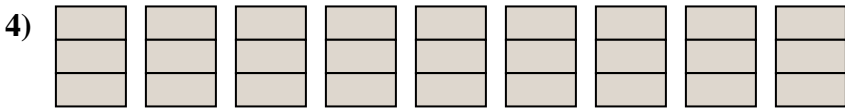
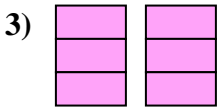
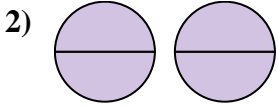
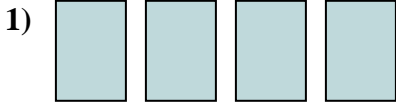
Answers

1.  $\frac{18}{3}$
2.  $\frac{12}{3}$
3.  $\frac{7}{1}$
4.  $\frac{6}{1}$
5.  $\frac{14}{2}$
6.  $\frac{3}{1}$
7.  $\frac{9}{1}$
8.  $\frac{21}{3}$
9.  $\frac{4}{2}$
10.  $\frac{10}{2}$
11.  $\frac{2}{1}$
12.  $\frac{5}{1}$
13.  $\frac{16}{2}$
14.  $\frac{12}{2}$
15.  $\frac{24}{3}$



Express the amount shown as a fraction.

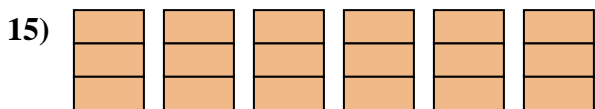
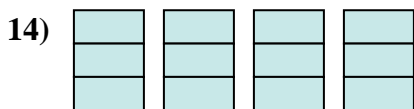
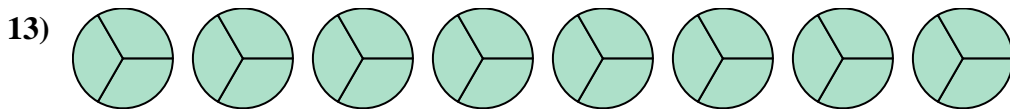
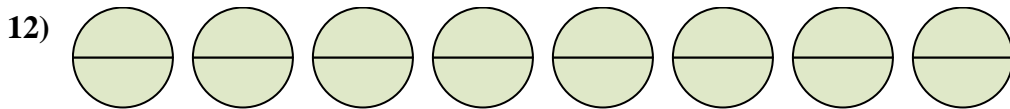
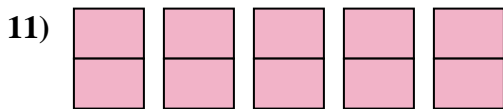
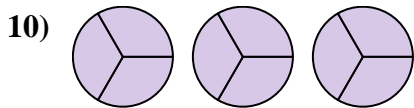
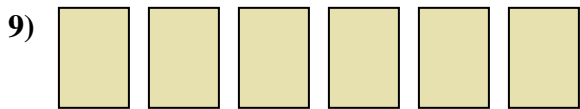
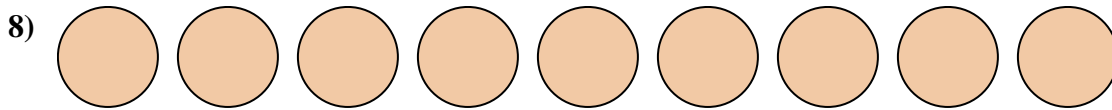
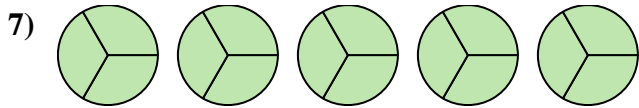
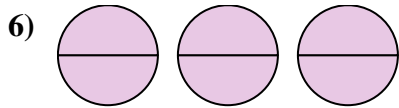
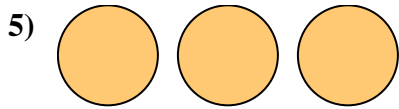
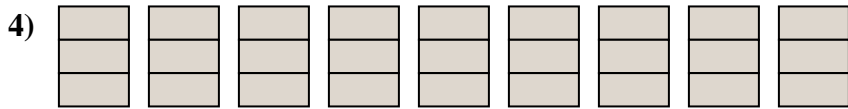
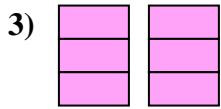
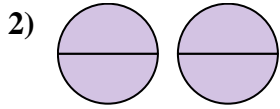
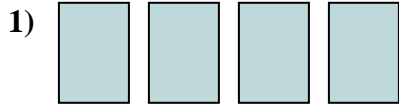
Answers



1. \_\_\_\_\_
2. \_\_\_\_\_
3. \_\_\_\_\_
4. \_\_\_\_\_
5. \_\_\_\_\_
6. \_\_\_\_\_
7. \_\_\_\_\_
8. \_\_\_\_\_
9. \_\_\_\_\_
10. \_\_\_\_\_
11. \_\_\_\_\_
12. \_\_\_\_\_
13. \_\_\_\_\_
14. \_\_\_\_\_
15. \_\_\_\_\_



Express the amount shown as a fraction.



Answers

1.  $\frac{4}{1}$

2.  $\frac{4}{2}$

3.  $\frac{6}{3}$

4.  $\frac{27}{3}$

5.  $\frac{3}{1}$

6.  $\frac{6}{2}$

7.  $\frac{15}{3}$

8.  $\frac{9}{1}$

9.  $\frac{6}{1}$

10.  $\frac{9}{3}$

11.  $\frac{10}{2}$

12.  $\frac{16}{2}$

13.  $\frac{24}{3}$

14.  $\frac{12}{3}$

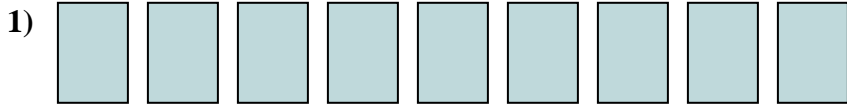
15.  $\frac{18}{3}$



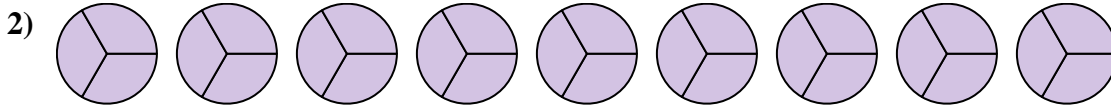


Express the amount shown as a fraction.

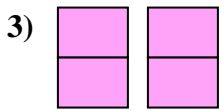
Answers



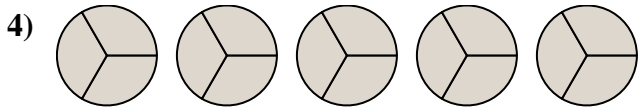
1. \_\_\_\_\_




2. \_\_\_\_\_



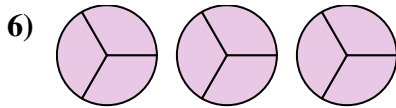
3. \_\_\_\_\_



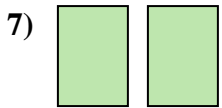
4. \_\_\_\_\_



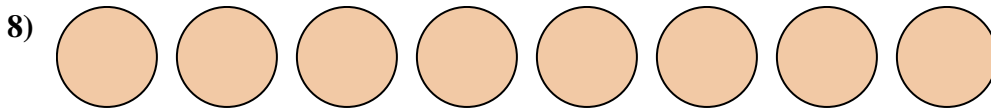
5. \_\_\_\_\_



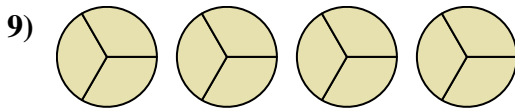
6. \_\_\_\_\_



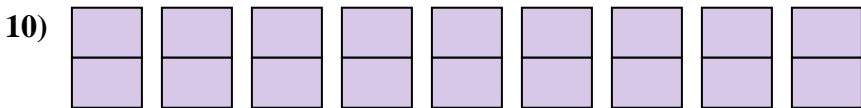
7. \_\_\_\_\_



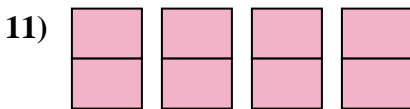
8. \_\_\_\_\_



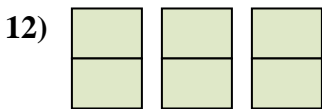
9. \_\_\_\_\_



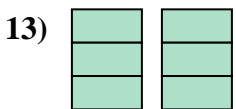
10. \_\_\_\_\_



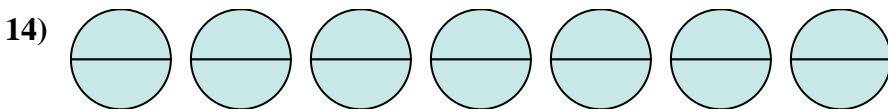
11. \_\_\_\_\_



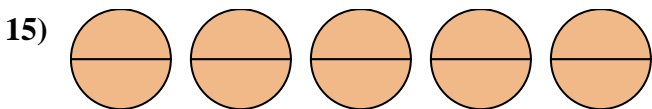
12. \_\_\_\_\_



13. \_\_\_\_\_



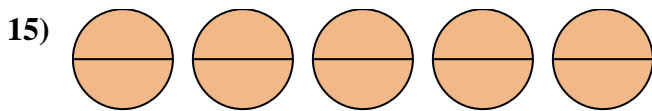
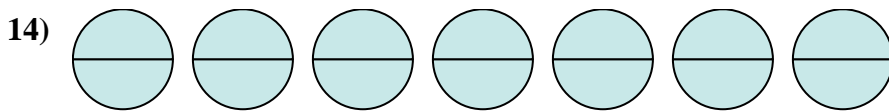
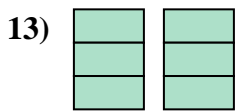
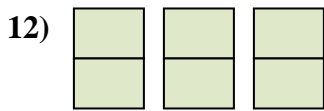
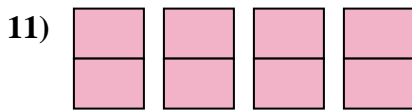
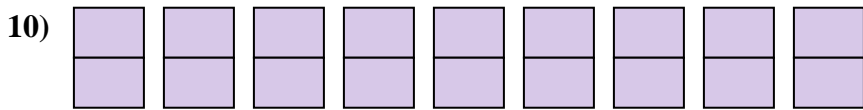
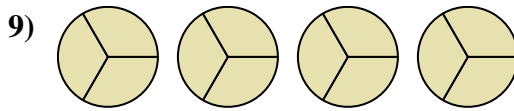
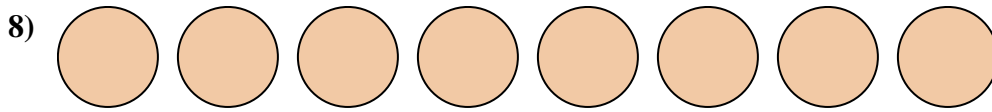
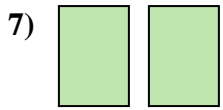
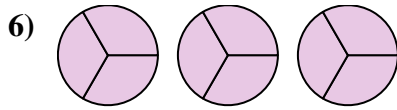
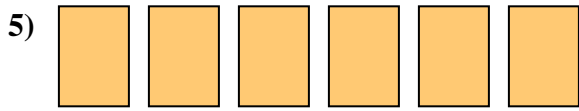
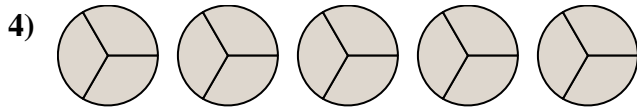
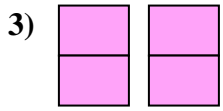
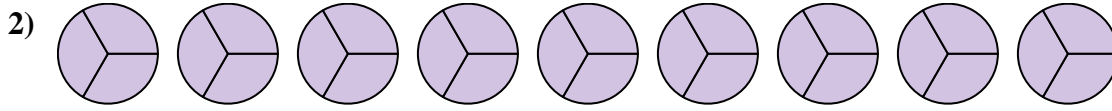
14. \_\_\_\_\_



15. \_\_\_\_\_



Express the amount shown as a fraction.



Answers

1.  $\frac{9}{1}$

2.  $\frac{27}{3}$

3.  $\frac{4}{2}$

4.  $\frac{15}{3}$

5.  $\frac{6}{1}$

6.  $\frac{9}{3}$

7.  $\frac{2}{1}$

8.  $\frac{8}{1}$

9.  $\frac{12}{3}$

10.  $\frac{18}{2}$

11.  $\frac{8}{2}$

12.  $\frac{6}{2}$

13.  $\frac{6}{3}$

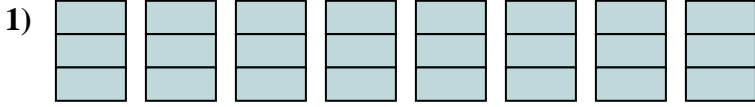
14.  $\frac{14}{2}$

15.  $\frac{10}{2}$

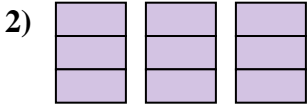


Express the amount shown as a fraction.

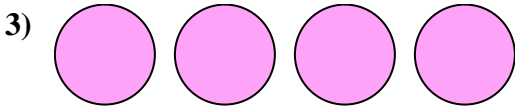
Answers



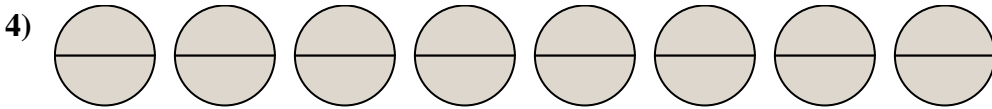
1. \_\_\_\_\_



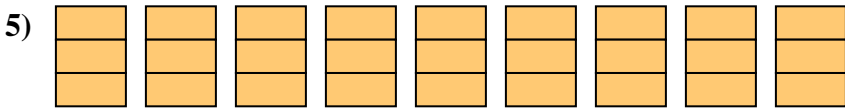
2. \_\_\_\_\_



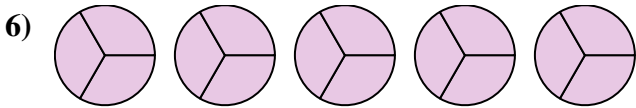
3. \_\_\_\_\_



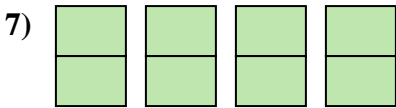
4. \_\_\_\_\_



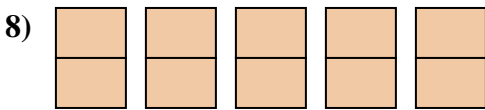
5. \_\_\_\_\_



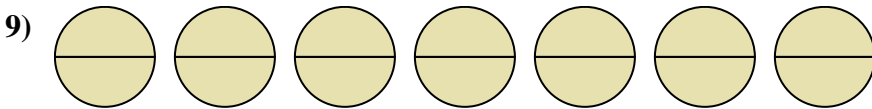
6. \_\_\_\_\_



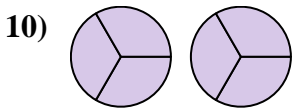
7. \_\_\_\_\_



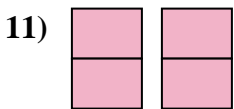
8. \_\_\_\_\_



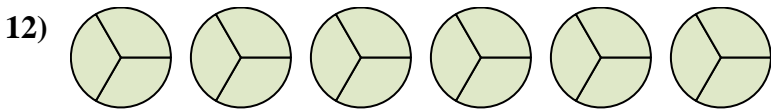
9. \_\_\_\_\_



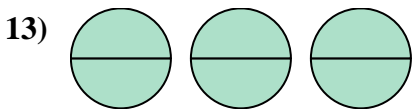
10. \_\_\_\_\_



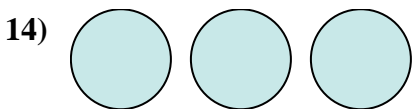
11. \_\_\_\_\_



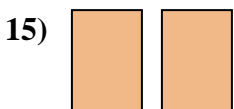
12. \_\_\_\_\_



13. \_\_\_\_\_



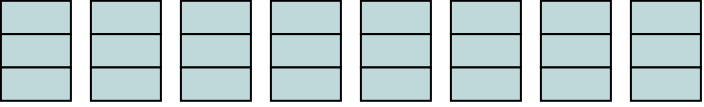
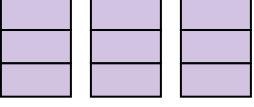
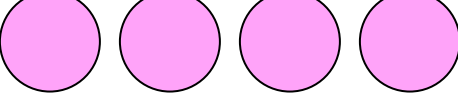
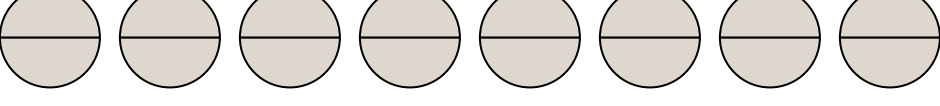

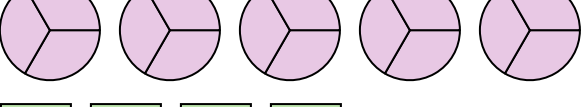
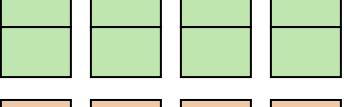
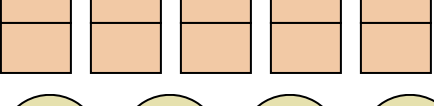
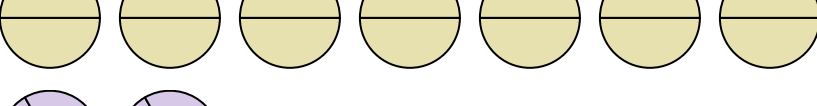
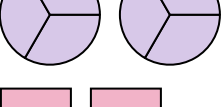
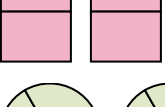

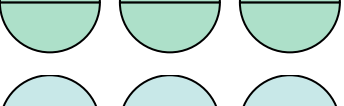
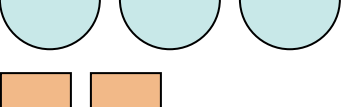
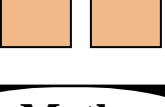
14. \_\_\_\_\_



15. \_\_\_\_\_



Express the amount shown as a fraction.

- 1) 
- 2) 
- 3) 
- 4) 
- 5) 
- 6) 
- 7) 
- 8) 
- 9) 
- 10) 
- 11) 
- 12) 
- 13) 
- 14) 
- 15) 

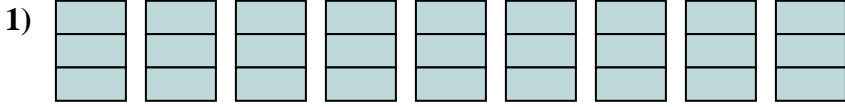
Answers

1.  $\frac{24}{3}$
2.  $\frac{9}{3}$
3.  $\frac{4}{1}$
4.  $\frac{16}{2}$
5.  $\frac{27}{3}$
6.  $\frac{15}{3}$
7.  $\frac{8}{2}$
8.  $\frac{10}{2}$
9.  $\frac{14}{2}$
10.  $\frac{6}{3}$
11.  $\frac{4}{2}$
12.  $\frac{18}{3}$
13.  $\frac{6}{2}$
14.  $\frac{3}{1}$
15.  $\frac{2}{1}$

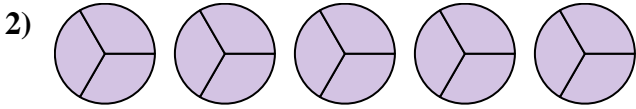


Express the amount shown as a fraction.

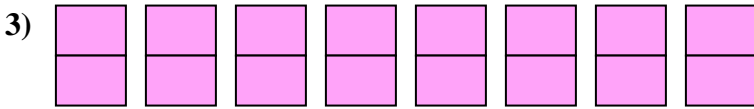
Answers



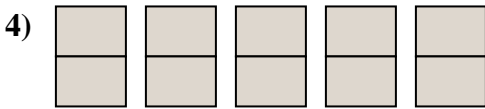
1. \_\_\_\_\_



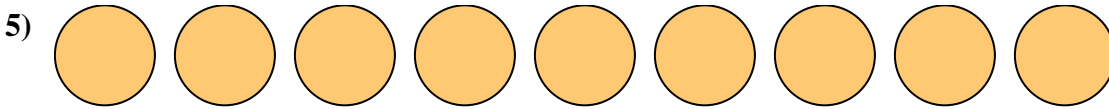
2. \_\_\_\_\_



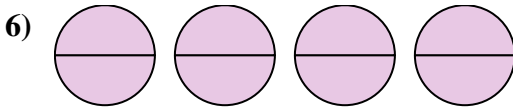
3. \_\_\_\_\_



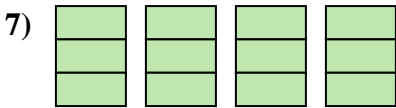
4. \_\_\_\_\_



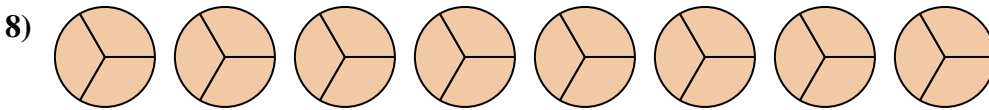
5. \_\_\_\_\_



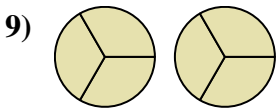
6. \_\_\_\_\_



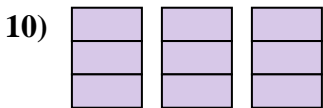
7. \_\_\_\_\_



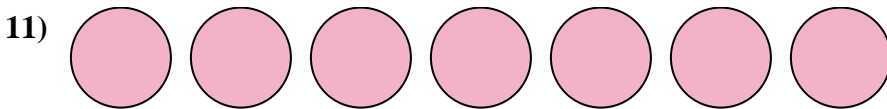
8. \_\_\_\_\_



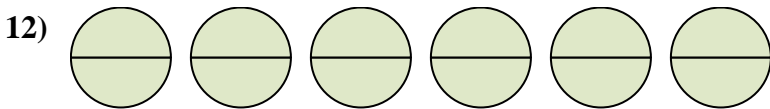
9. \_\_\_\_\_



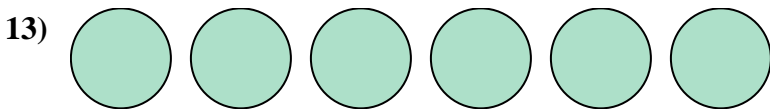
10. \_\_\_\_\_



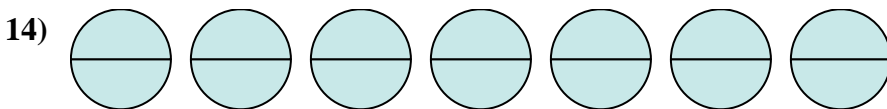
11. \_\_\_\_\_



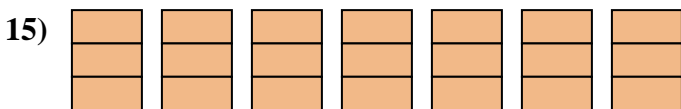
12. \_\_\_\_\_



13. \_\_\_\_\_



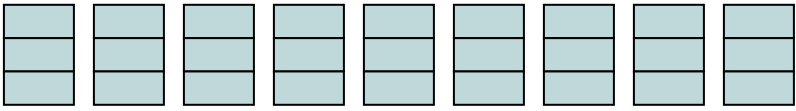
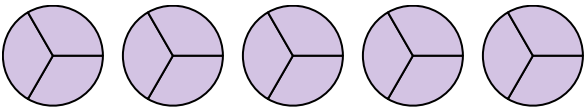
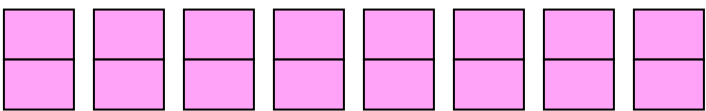
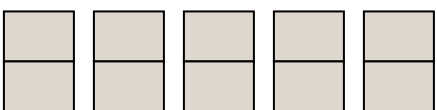

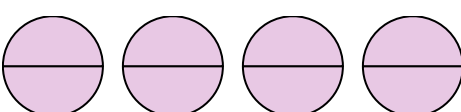
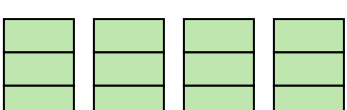
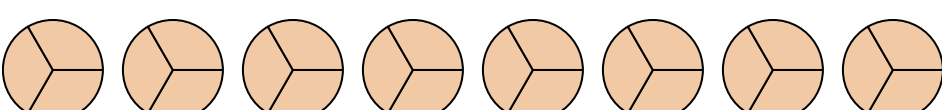
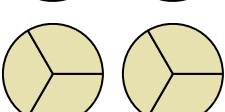
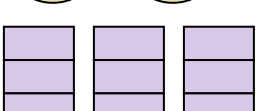

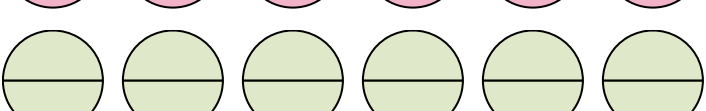
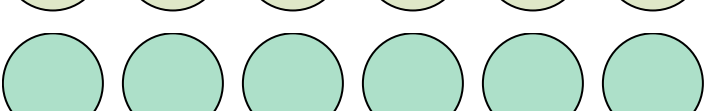
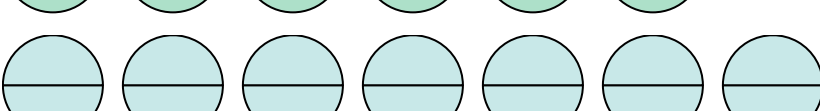
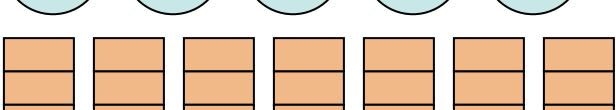
14. \_\_\_\_\_



15. \_\_\_\_\_



Express the amount shown as a fraction.

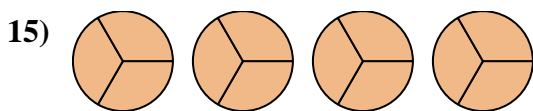
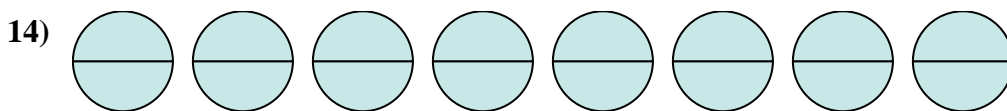
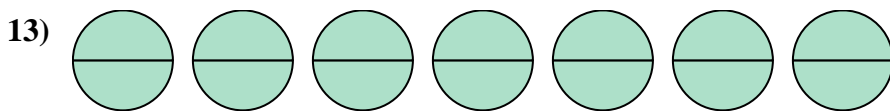
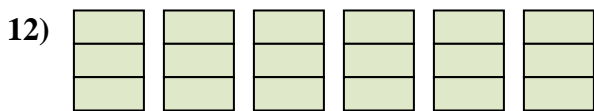
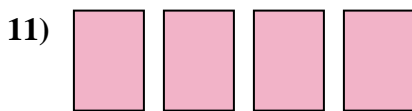
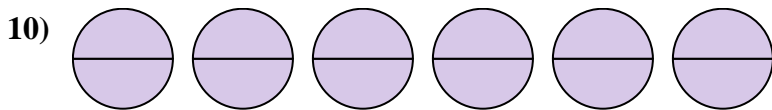
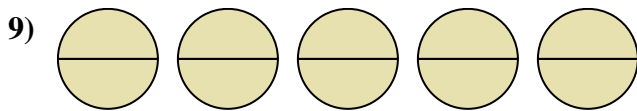
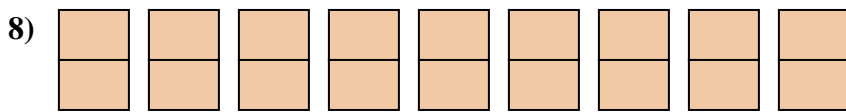
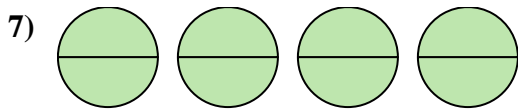
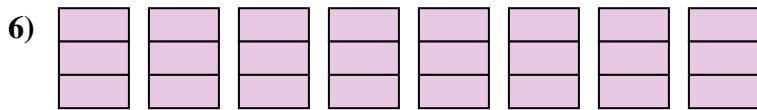
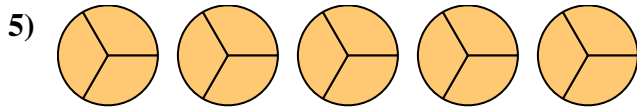
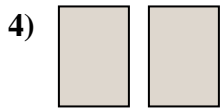


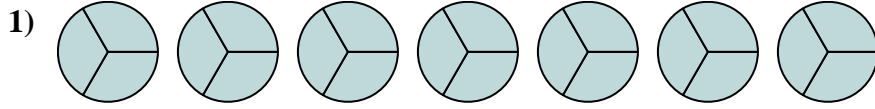
- 1) 
- 2) 
- 3) 
- 4) 
- 5) 
- 6) 
- 7) 
- 8) 
- 9) 
- 10) 
- 11) 
- 12) 
- 13) 
- 14) 
- 15) 

Answers

1.  $\frac{27}{3}$
2.  $\frac{15}{3}$
3.  $\frac{16}{2}$
4.  $\frac{10}{2}$
5.  $\frac{9}{1}$
6.  $\frac{8}{2}$
7.  $\frac{12}{3}$
8.  $\frac{24}{3}$
9.  $\frac{6}{3}$
10.  $\frac{9}{3}$
11.  $\frac{7}{1}$
12.  $\frac{12}{2}$
13.  $\frac{6}{1}$
14.  $\frac{14}{2}$
15.  $\frac{21}{3}$



Express the amount shown as a fraction.



Answers

1. \_\_\_\_\_

2. \_\_\_\_\_

3. \_\_\_\_\_

4. \_\_\_\_\_

5. \_\_\_\_\_

6. \_\_\_\_\_

7. \_\_\_\_\_

8. \_\_\_\_\_

9. \_\_\_\_\_

10. \_\_\_\_\_

11. \_\_\_\_\_

12. \_\_\_\_\_

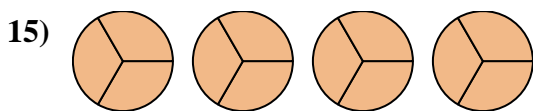
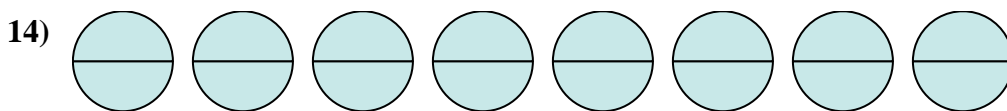
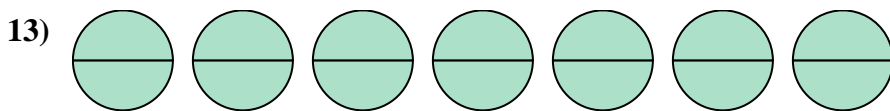
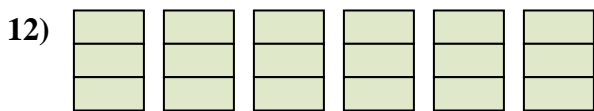
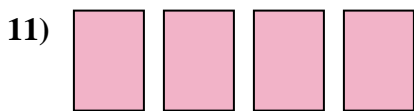
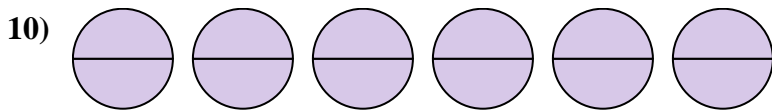
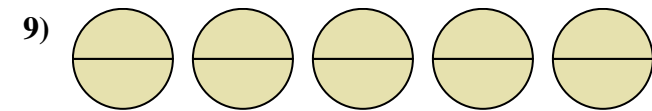
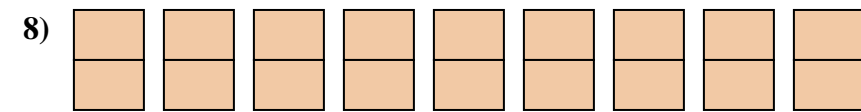
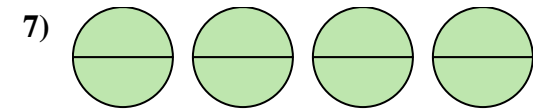
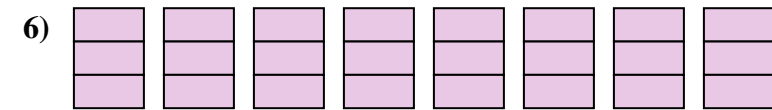
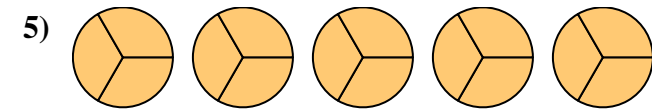
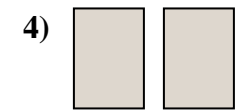


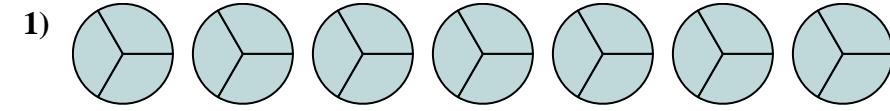
13. \_\_\_\_\_

14. \_\_\_\_\_

15. \_\_\_\_\_



Express the amount shown as a fraction.



Answers

1.  $\frac{21}{3}$

2.  $\frac{8}{1}$

3.  $\frac{6}{1}$

4.  $\frac{2}{1}$

5.  $\frac{15}{3}$

6.  $\frac{24}{3}$

7.  $\frac{8}{2}$

8.  $\frac{18}{2}$

9.  $\frac{10}{2}$

10.  $\frac{12}{2}$

11.  $\frac{4}{1}$

12.  $\frac{18}{3}$

13.  $\frac{14}{2}$

14.  $\frac{16}{2}$

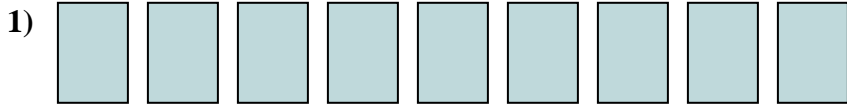
15.  $\frac{12}{3}$



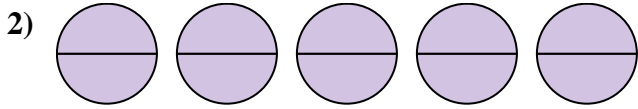


Express the amount shown as a fraction.

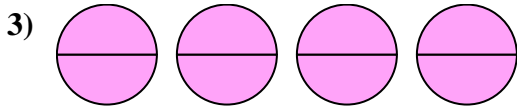
Answers



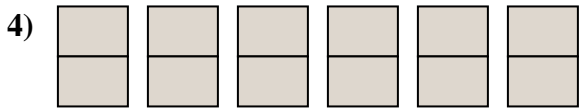
1. \_\_\_\_\_



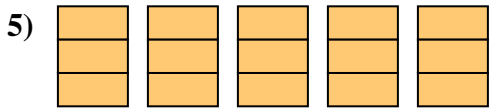
2. \_\_\_\_\_



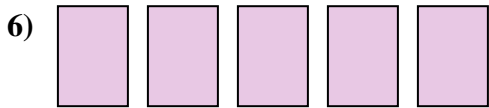
3. \_\_\_\_\_



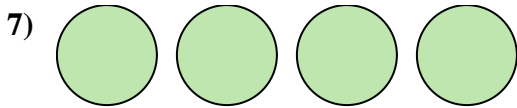
4. \_\_\_\_\_



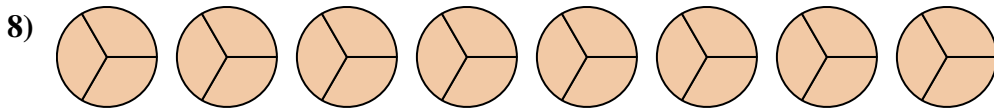
5. \_\_\_\_\_



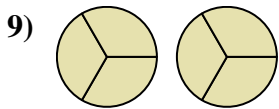
6. \_\_\_\_\_




7. \_\_\_\_\_



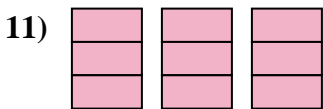
8. \_\_\_\_\_



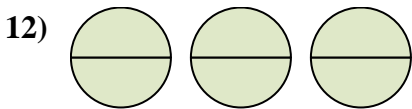
9. \_\_\_\_\_



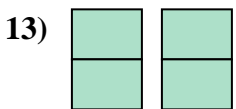
10. \_\_\_\_\_



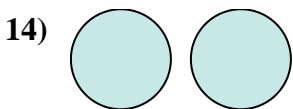
11. \_\_\_\_\_



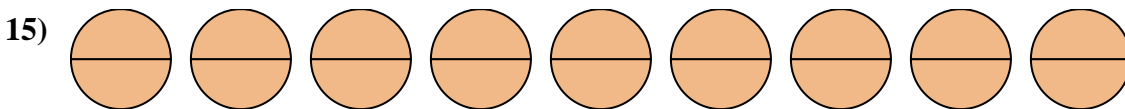
12. \_\_\_\_\_



13. \_\_\_\_\_




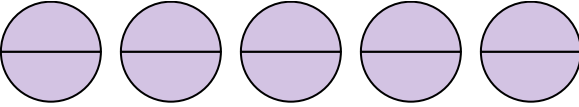
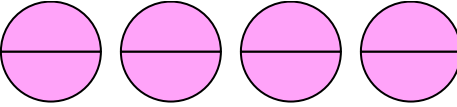
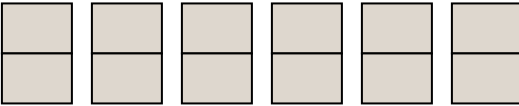
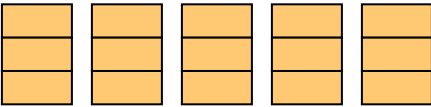

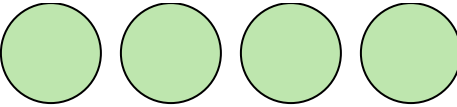
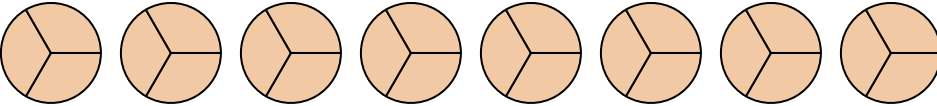
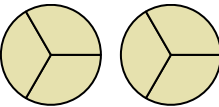
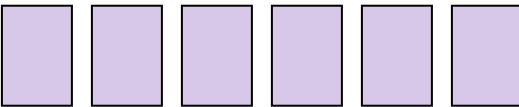

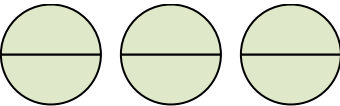
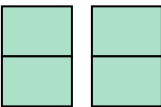
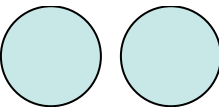
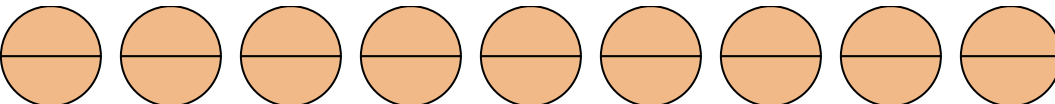
14. \_\_\_\_\_



15. \_\_\_\_\_



Express the amount shown as a fraction.

- 1) 
- 2) 
- 3) 
- 4) 
- 5) 
- 6) 
- 7) 
- 8) 
- 9) 
- 10) 
- 11) 
- 12) 
- 13) 
- 14) 
- 15) 

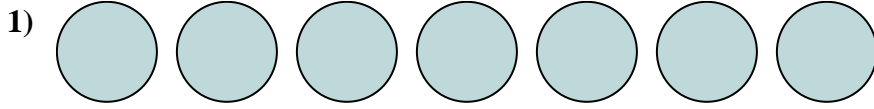
Answers

1.  $\frac{9}{1}$
2.  $\frac{10}{2}$
3.  $\frac{8}{2}$
4.  $\frac{12}{2}$
5.  $\frac{15}{3}$
6.  $\frac{5}{1}$
7.  $\frac{4}{1}$
8.  $\frac{24}{3}$
9.  $\frac{6}{3}$
10.  $\frac{6}{1}$
11.  $\frac{9}{3}$
12.  $\frac{6}{2}$
13.  $\frac{4}{2}$
14.  $\frac{2}{1}$
15.  $\frac{18}{2}$

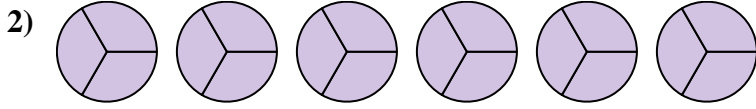


Express the amount shown as a fraction.

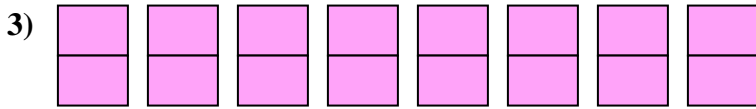
Answers



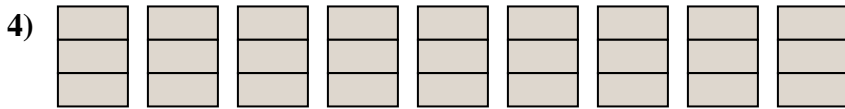
1. \_\_\_\_\_



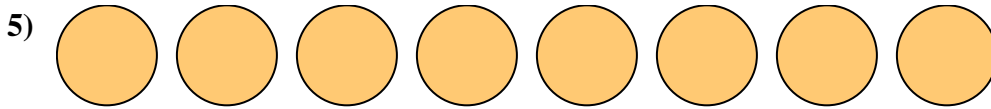
2. \_\_\_\_\_



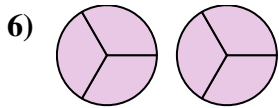
3. \_\_\_\_\_



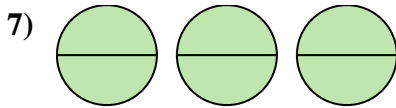
4. \_\_\_\_\_



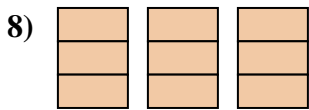
5. \_\_\_\_\_



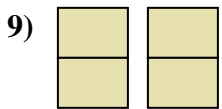
6. \_\_\_\_\_



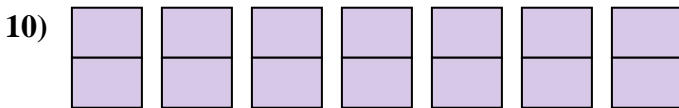
7. \_\_\_\_\_



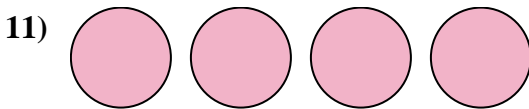
8. \_\_\_\_\_



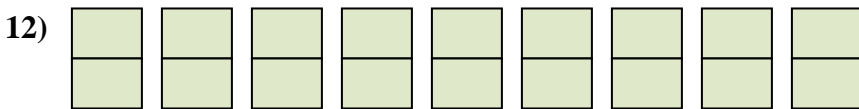
9. \_\_\_\_\_



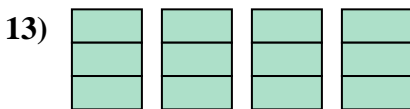
10. \_\_\_\_\_



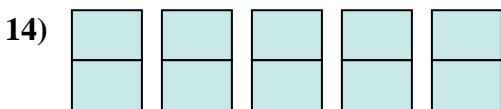
11. \_\_\_\_\_



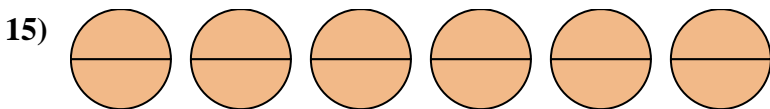
12. \_\_\_\_\_



13. \_\_\_\_\_



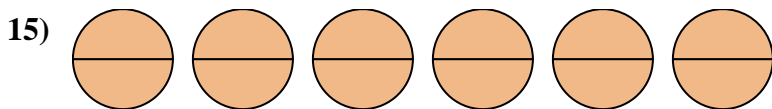
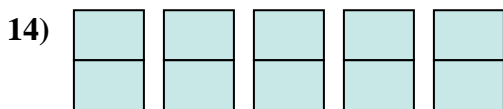
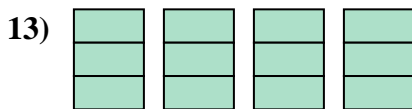
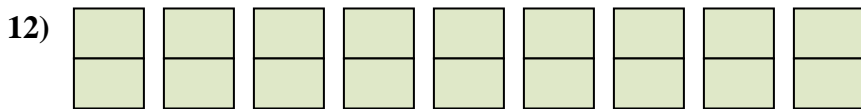
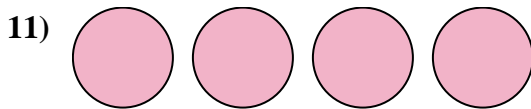
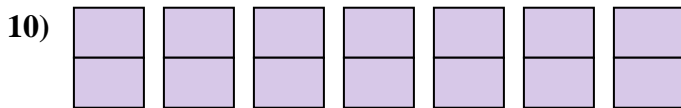
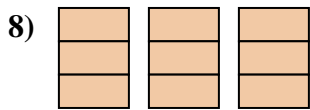
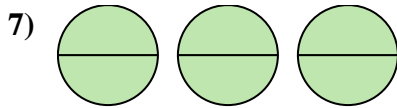
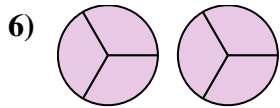
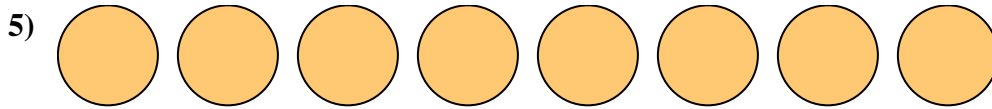
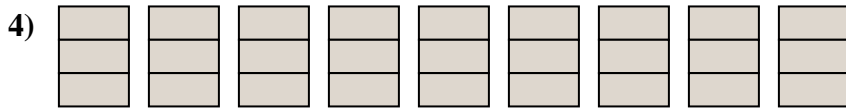
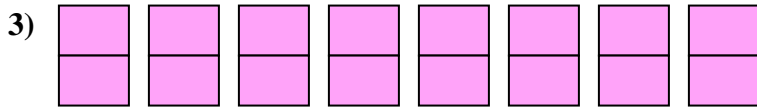
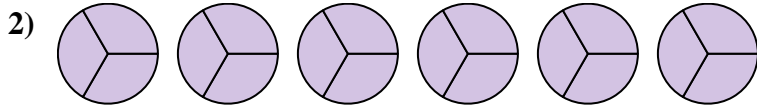
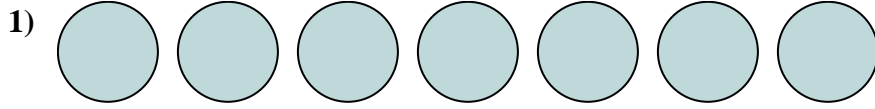
14. \_\_\_\_\_



15. \_\_\_\_\_



Express the amount shown as a fraction.



Answers

1.  $\frac{7}{1}$

2.  $\frac{18}{3}$

3.  $\frac{16}{2}$

4.  $\frac{27}{3}$

5.  $\frac{8}{1}$

6.  $\frac{6}{3}$

7.  $\frac{6}{2}$

8.  $\frac{9}{3}$

9.  $\frac{4}{2}$

10.  $\frac{14}{2}$

11.  $\frac{4}{1}$

12.  $\frac{18}{2}$

13.  $\frac{12}{3}$

14.  $\frac{10}{2}$

15.  $\frac{12}{2}$