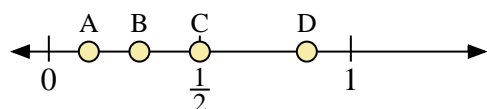
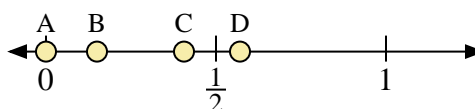




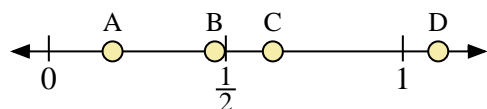
Use the number lines to answer the questions.



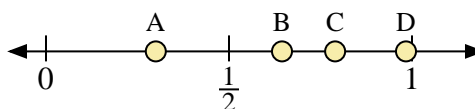
- 1) Which letter best represents the location of 0.5?
- 2) Which letter best represents the location of 0.30?



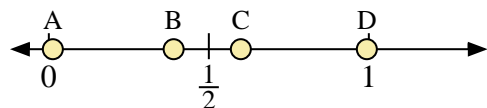
- 3) Which letter best represents the location of 0.00?
- 4) Which letter best represents the location of 0.15?



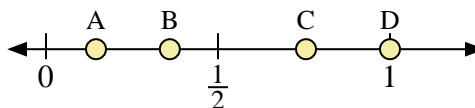
- 5) Which letter best represents the location of 1.10?
- 6) Which letter best represents the location of 0.18?



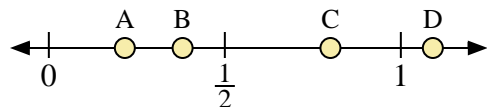
- 7) Which letter best represents the location of 0.30?
- 8) Which letter best represents the location of 0.79?



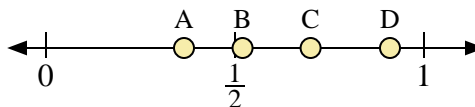
- 9) Which letter best represents the location of 0.6?
- 10) Which letter best represents the location of 0.39?



- 11) Which letter best represents the location of 1.00?
- 12) Which letter best represents the location of 0.36?



- 13) Which letter best represents the location of 0.80?
- 14) Which letter best represents the location of 0.38?



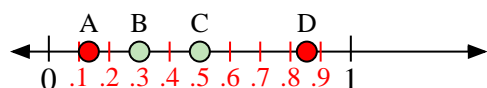
- 15) Which letter best represents the location of 0.70?
- 16) Which letter best represents the location of 0.52?

Answers

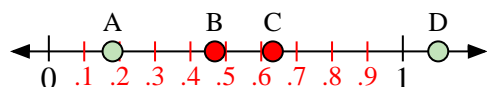
1. _____
2. _____
3. _____
4. _____
5. _____
6. _____
7. _____
8. _____
9. _____
10. _____
11. _____
12. _____
13. _____
14. _____
15. _____
16. _____



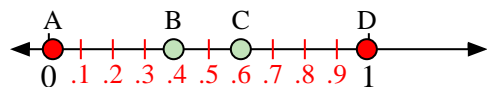
Use the number lines to answer the questions.



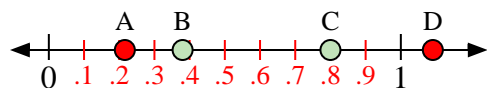
- 1) Which letter best represents the location of 0.5?
- 2) Which letter best represents the location of 0.30?



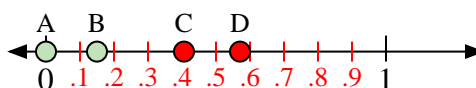
- 5) Which letter best represents the location of 1.10?
- 6) Which letter best represents the location of 0.18?



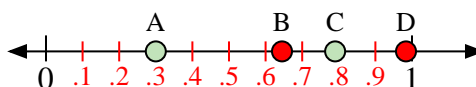
- 9) Which letter best represents the location of 0.6?
- 10) Which letter best represents the location of 0.39?



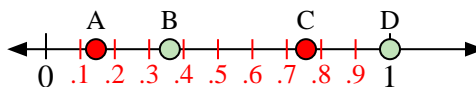
- 13) Which letter best represents the location of 0.80?
- 14) Which letter best represents the location of 0.38?



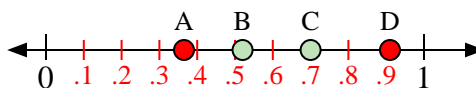
- 3) Which letter best represents the location of 0.00?
- 4) Which letter best represents the location of 0.15?



- 7) Which letter best represents the location of 0.30?
- 8) Which letter best represents the location of 0.79?



- 11) Which letter best represents the location of 1.00?
- 12) Which letter best represents the location of 0.36?



- 15) Which letter best represents the location of 0.70?
- 16) Which letter best represents the location of 0.52?

Answers

1. **C**
2. **B**
3. **A**
4. **B**
5. **D**
6. **A**
7. **A**
8. **C**
9. **C**
10. **B**
11. **D**
12. **B**
13. **C**
14. **B**
15. **C**
16. **B**