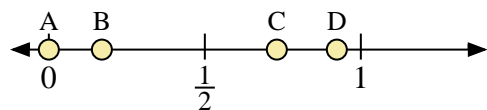
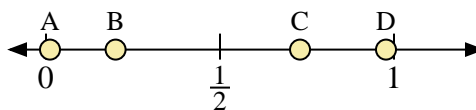




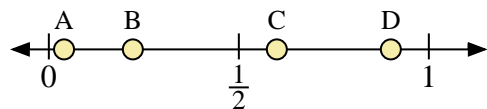
Use the number lines to answer the questions.



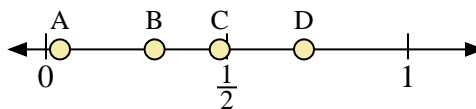
- 1) Which letter best represents the location of 0.0?
- 2) Which letter best represents the location of 0.17?



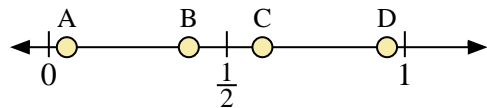
- 3) Which letter best represents the location of 0.2?
- 4) Which letter best represents the location of 0.73?



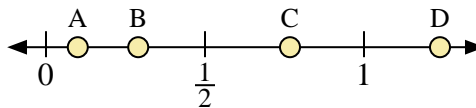
- 5) Which letter best represents the location of 0.90?
- 6) Which letter best represents the location of 0.04?



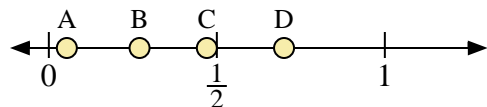
- 7) Which letter best represents the location of 0.30?
- 8) Which letter best represents the location of 0.48?



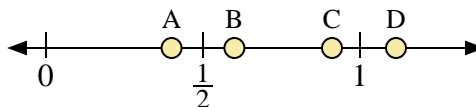
- 9) Which letter best represents the location of 0.6?
- 10) Which letter best represents the location of 0.95?



- 11) Which letter best represents the location of 0.1?
- 12) Which letter best represents the location of 0.29?



- 13) Which letter best represents the location of 0.7?
- 14) Which letter best represents the location of 0.27?



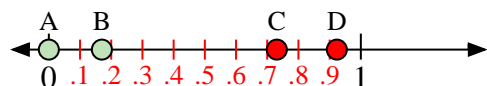
- 15) Which letter best represents the location of 0.4?
- 16) Which letter best represents the location of 0.60?

**Answers**

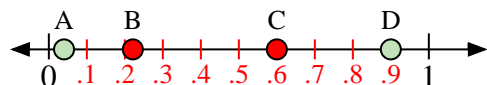
1. \_\_\_\_\_
2. \_\_\_\_\_
3. \_\_\_\_\_
4. \_\_\_\_\_
5. \_\_\_\_\_
6. \_\_\_\_\_
7. \_\_\_\_\_
8. \_\_\_\_\_
9. \_\_\_\_\_
10. \_\_\_\_\_
11. \_\_\_\_\_
12. \_\_\_\_\_
13. \_\_\_\_\_
14. \_\_\_\_\_
15. \_\_\_\_\_
16. \_\_\_\_\_



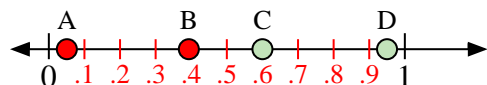
Use the number lines to answer the questions.



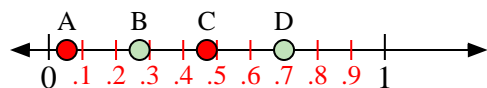
- 1) Which letter best represents the location of 0.0?
- 2) Which letter best represents the location of 0.17?




- 5) Which letter best represents the location of 0.90?
- 6) Which letter best represents the location of 0.04?



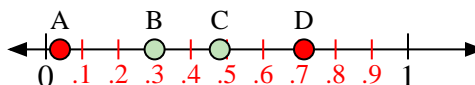
- 9) Which letter best represents the location of 0.6?
- 10) Which letter best represents the location of 0.95?




- 13) Which letter best represents the location of 0.7?
- 14) Which letter best represents the location of 0.27?



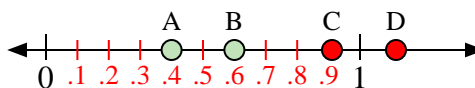
- 3) Which letter best represents the location of 0.2?
- 4) Which letter best represents the location of 0.73?



- 7) Which letter best represents the location of 0.30?
- 8) Which letter best represents the location of 0.48?



- 11) Which letter best represents the location of 0.1?
- 12) Which letter best represents the location of 0.29?



- 15) Which letter best represents the location of 0.4?
- 16) Which letter best represents the location of 0.60?

**Answers**

1. **A**
2. **B**
3. **B**
4. **C**
5. **D**
6. **A**
7. **B**
8. **C**
9. **C**
10. **D**
11. **A**
12. **B**
13. **D**
14. **B**
15. **A**
16. **B**