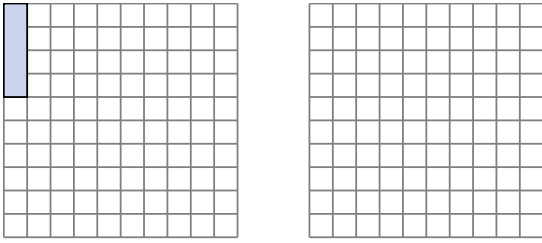


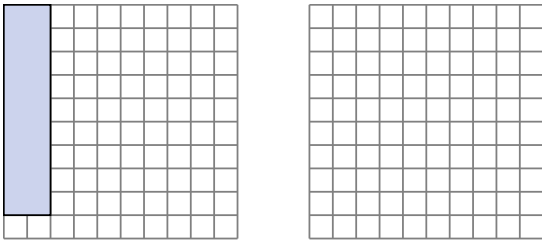


Solve each problem.

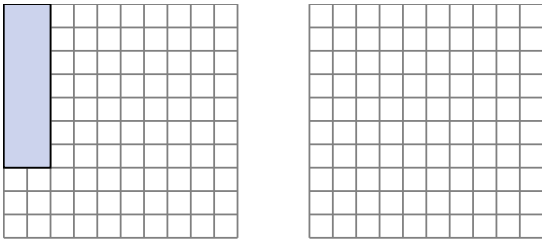
- 1) The rectangle below has the dimensions 1×4 . Create a rectangle with the same perimeter, but a different area.



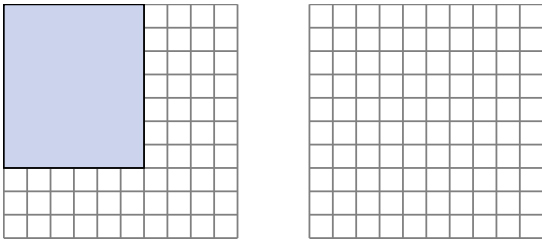
- 2) The rectangle below has the dimensions 2×9 . Create a rectangle with the same perimeter, but a different area.



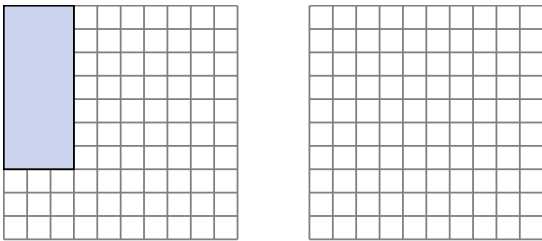
- 3) The rectangle below has the dimensions 2×7 . Create a rectangle with the same perimeter, but a different area.



- 4) The rectangle below has the dimensions 6×7 . Create a rectangle with the same perimeter, but a different area.



- 5) The rectangle below has the dimensions 3×7 . Create a rectangle with the same perimeter, but a different area.



Answers

1. _____

2. _____

3. _____

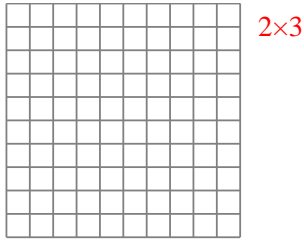
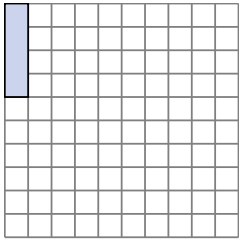
4. _____

5. _____

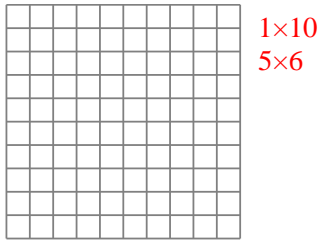
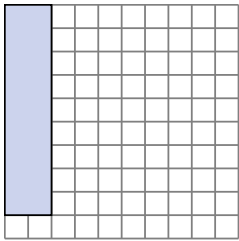


Solve each problem.

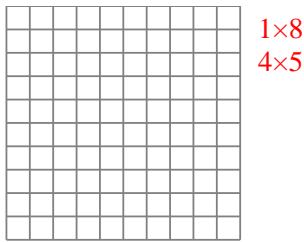
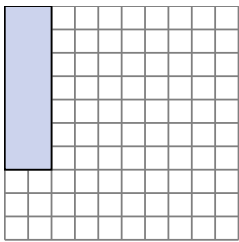
- 1) The rectangle below has the dimensions 1×4 . Create a rectangle with the same perimeter, but a different area.



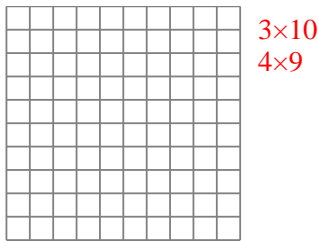
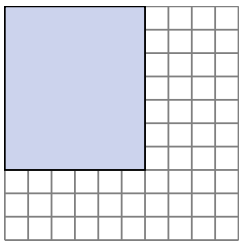
- 2) The rectangle below has the dimensions 2×9 . Create a rectangle with the same perimeter, but a different area.




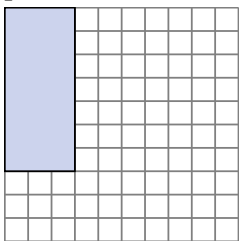
- 3) The rectangle below has the dimensions 2×7 . Create a rectangle with the same perimeter, but a different area.



- 4) The rectangle below has the dimensions 6×7 . Create a rectangle with the same perimeter, but a different area.



- 5) The rectangle below has the dimensions 3×7 . Create a rectangle with the same perimeter, but a different area.



Answers

1. 2×3

2. $1 \times 10 : 5 \times 6$

3. $1 \times 8 : 4 \times 5$

4. $3 \times 10 : 4 \times 9$

5. 1×9