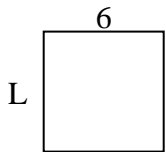


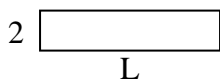


Determine the value of 'L'. Lengths are in cm (not to scale).

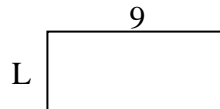
1) Perimeter = 24



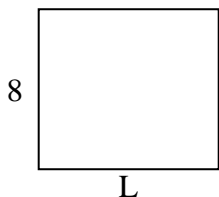
2) Perimeter = 22



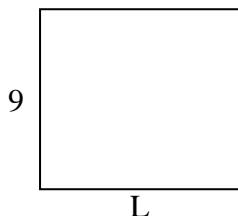
3) Perimeter = 26



4) Perimeter = 34



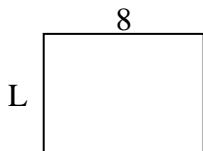
5) Perimeter = 38




6) Perimeter = 22



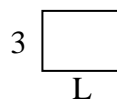
7) Perimeter = 28




8) Perimeter = 20



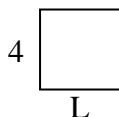
9) Perimeter = 14



10) Perimeter = 28



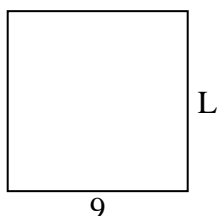
11) Perimeter = 16



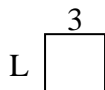
12) Perimeter = 16



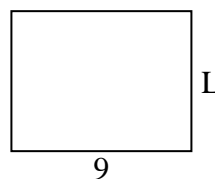
13) Perimeter = 36



14) Perimeter = 12



15) Perimeter = 32



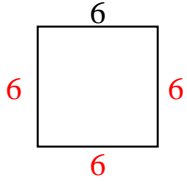
Answers

1. _____
2. _____
3. _____
4. _____
5. _____
6. _____
7. _____
8. _____
9. _____
10. _____
11. _____
12. _____
13. _____
14. _____
15. _____




Determine the value of 'L'. Lengths are in cm (not to scale).

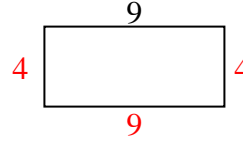
1) Perimeter = 24



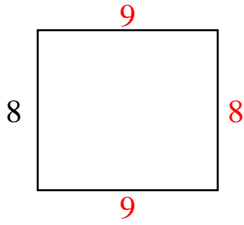
2) Perimeter = 22



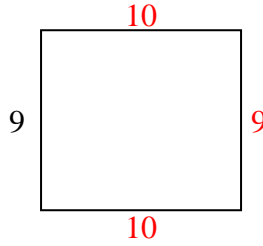
3) Perimeter = 26



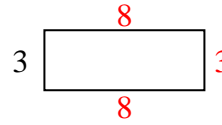
4) Perimeter = 34



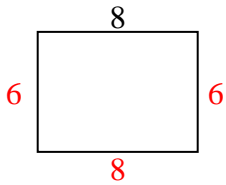
5) Perimeter = 38



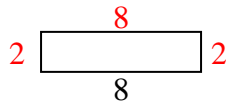
6) Perimeter = 22



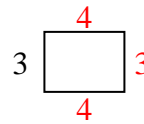
7) Perimeter = 28



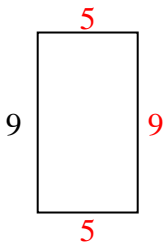
8) Perimeter = 20



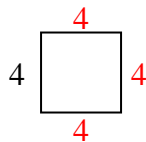
9) Perimeter = 14



10) Perimeter = 28



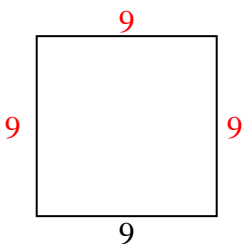
11) Perimeter = 16



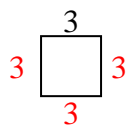
12) Perimeter = 16



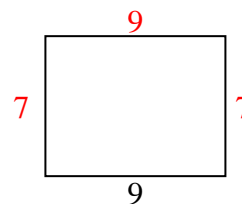
13) Perimeter = 36



14) Perimeter = 12



15) Perimeter = 32



Answers

1. 6 cm
2. 9 cm
3. 4 cm
4. 9 cm
5. 10 cm
6. 8 cm
7. 6 cm
8. 2 cm
9. 4 cm
10. 5 cm
11. 4 cm
12. 6 cm
13. 9 cm
14. 3 cm
15. 7 cm