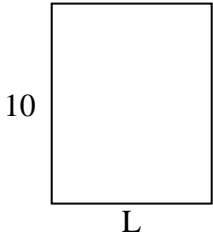


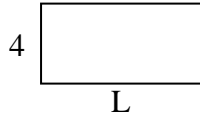


Determine the value of 'L'. Lengths are in cm (not to scale).

1) Perimeter = 36



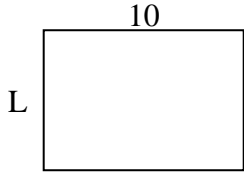
2) Perimeter = 24




3) Perimeter = 10



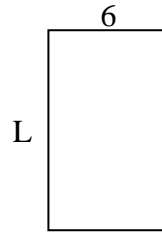
4) Perimeter = 34



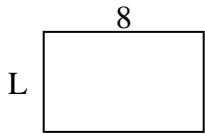
5) Perimeter = 28



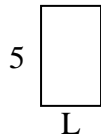
6) Perimeter = 32



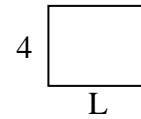
7) Perimeter = 26



8) Perimeter = 16



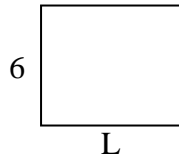
9) Perimeter = 18



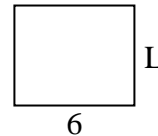
10) Perimeter = 24



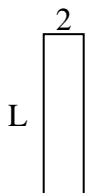
11) Perimeter = 26



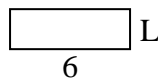
12) Perimeter = 22



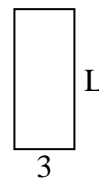
13) Perimeter = 20



14) Perimeter = 16



15) Perimeter = 20



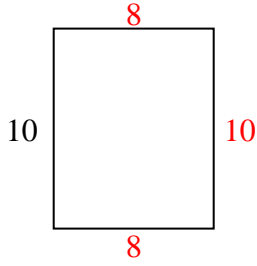
Answers

1. _____
2. _____
3. _____
4. _____
5. _____
6. _____
7. _____
8. _____
9. _____
10. _____
11. _____
12. _____
13. _____
14. _____
15. _____

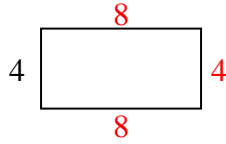


Determine the value of 'L'. Lengths are in cm (not to scale).

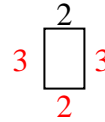
1) Perimeter = 36



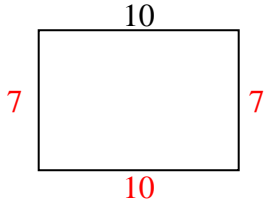
2) Perimeter = 24




3) Perimeter = 10



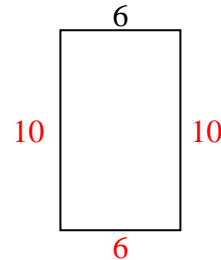
4) Perimeter = 34



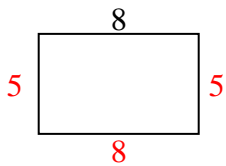
5) Perimeter = 28



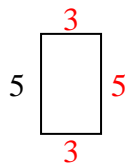
6) Perimeter = 32



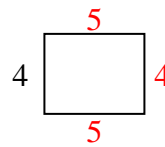
7) Perimeter = 26



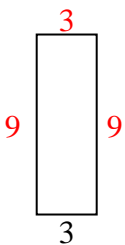
8) Perimeter = 16



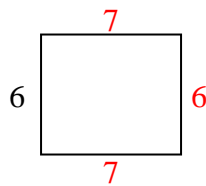
9) Perimeter = 18



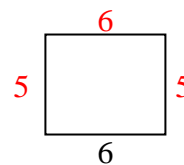
10) Perimeter = 24



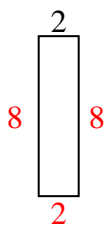
11) Perimeter = 26



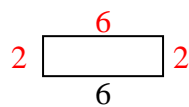
12) Perimeter = 22



13) Perimeter = 20



14) Perimeter = 16



15) Perimeter = 20



Answers

1. 8 cm
2. 8 cm
3. 3 cm
4. 7 cm
5. 4 cm
6. 10 cm
7. 5 cm
8. 3 cm
9. 5 cm
10. 9 cm
11. 7 cm
12. 5 cm
13. 8 cm
14. 2 cm
15. 7 cm