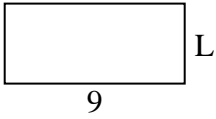





Determine the value of 'L'. Lengths are in cm (not to scale).

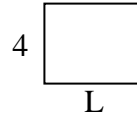
1) Perimeter = 26



2) Perimeter = 24




3) Perimeter = 18




4) Perimeter = 22



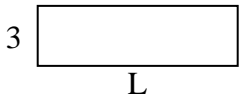
5) Perimeter = 20



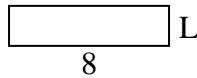
6) Perimeter = 28



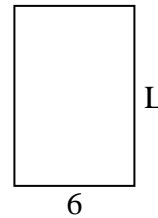
7) Perimeter = 26



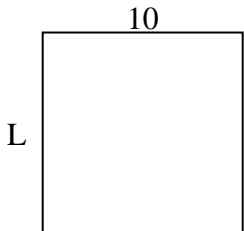
8) Perimeter = 20



9) Perimeter = 30



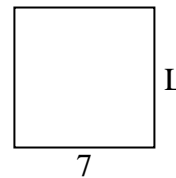
10) Perimeter = 40



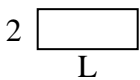
11) Perimeter = 28



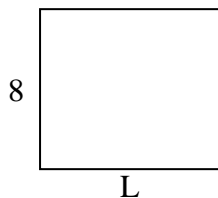
12) Perimeter = 28



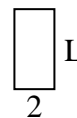
13) Perimeter = 14



14) Perimeter = 34



15) Perimeter = 12



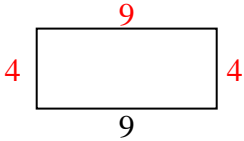
Answers

1. _____
2. _____
3. _____
4. _____
5. _____
6. _____
7. _____
8. _____
9. _____
10. _____
11. _____
12. _____
13. _____
14. _____
15. _____

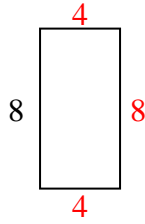


Determine the value of 'L'. Lengths are in cm (not to scale).

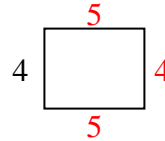
1) Perimeter = 26



2) Perimeter = 24



3) Perimeter = 18



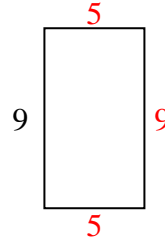
4) Perimeter = 22



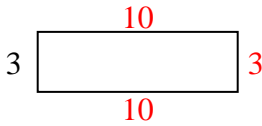
5) Perimeter = 20



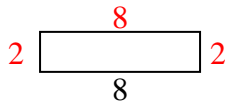
6) Perimeter = 28



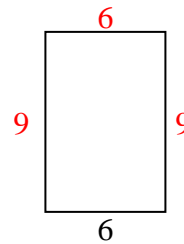
7) Perimeter = 26



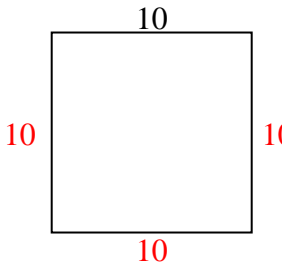
8) Perimeter = 20



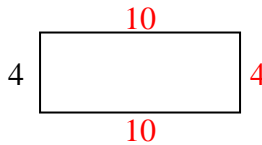
9) Perimeter = 30



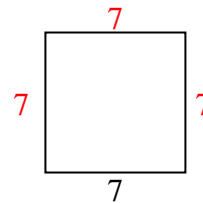
10) Perimeter = 40



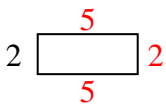
11) Perimeter = 28



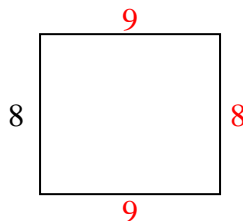
12) Perimeter = 28



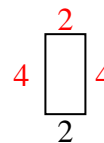
13) Perimeter = 14



14) Perimeter = 34



15) Perimeter = 12



Answers

1. 4 cm

2. 4 cm

3. 5 cm

4. 2 cm

5. 3 cm

6. 5 cm

7. 10 cm

8. 2 cm

9. 9 cm

10. 10 cm

11. 10 cm

12. 7 cm

13. 5 cm

14. 9 cm

15. 4 cm