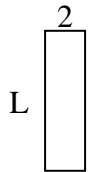


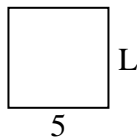


Determine the value of 'L'.

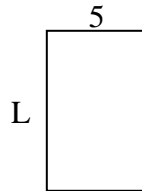
1) Area = $14 u^2$



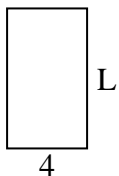
2) Area = $25 u^2$



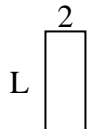
3) Area = $40 u^2$



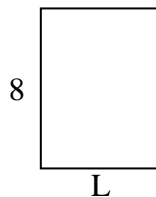
4) Area = $28 u^2$



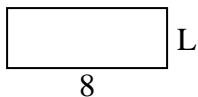
5) Area = $10 u^2$



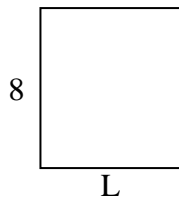
6) Area = $48 u^2$



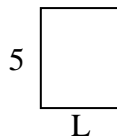
7) Area = $24 u^2$



8) Area = $56 u^2$



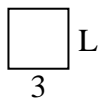
9) Area = $20 u^2$



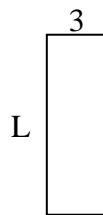
10) Area = $40 u^2$



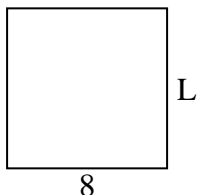
11) Area = $9 u^2$



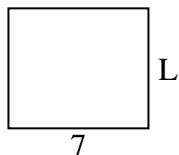
12) Area = $27 u^2$



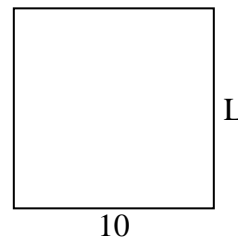
13) Area = $64 u^2$



14) Area = $42 u^2$



15) Area = $100 u^2$



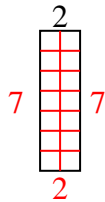
Answers

1. _____
2. _____
3. _____
4. _____
5. _____
6. _____
7. _____
8. _____
9. _____
10. _____
11. _____
12. _____
13. _____
14. _____
15. _____

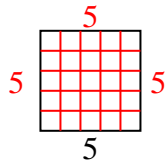


Determine the value of 'L'.

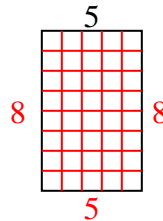
1) Area = $14 u^2$



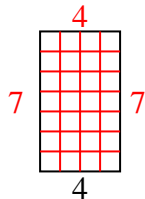
2) Area = $25 u^2$



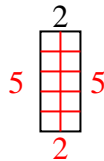
3) Area = $40 u^2$



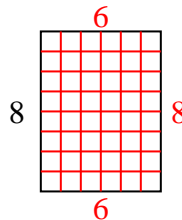
4) Area = $28 u^2$



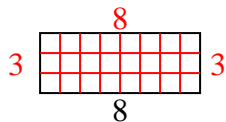
5) Area = $10 u^2$



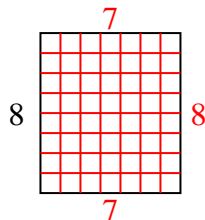
6) Area = $48 u^2$



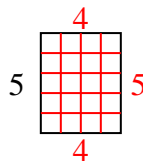
7) Area = $24 u^2$



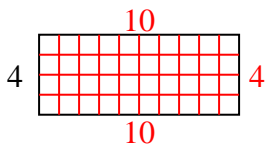
8) Area = $56 u^2$



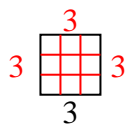
9) Area = $20 u^2$



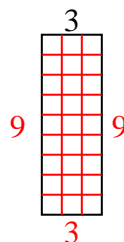
10) Area = $40 u^2$



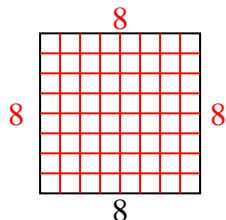
11) Area = $9 u^2$



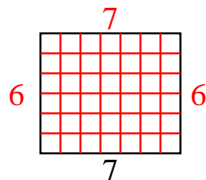
12) Area = $27 u^2$



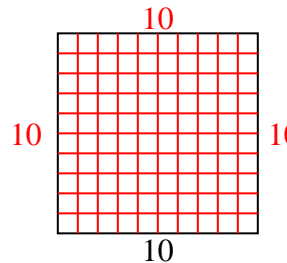
13) Area = $64 u^2$



14) Area = $42 u^2$



15) Area = $100 u^2$



Answers

1. 7

2. 5

3. 8

4. 7

5. 5

6. 6

7. 3

8. 7

9. 4

10. 10

11. 3

12. 9

13. 8

14. 6

15. 10