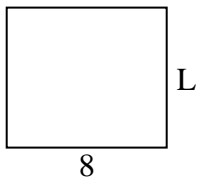


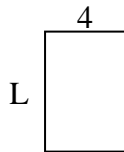


Determine the value of 'L'.

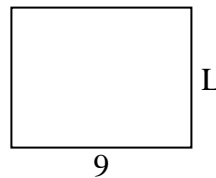
1) Area = $56 u^2$



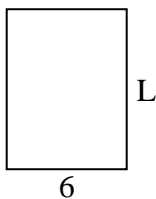
2) Area = $24 u^2$



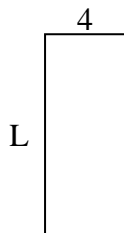
3) Area = $63 u^2$



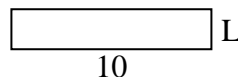
4) Area = $48 u^2$



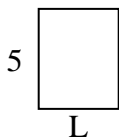
5) Area = $40 u^2$



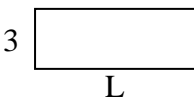
6) Area = $20 u^2$



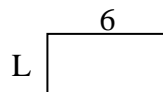
7) Area = $20 u^2$



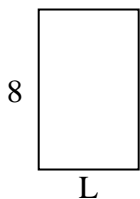
8) Area = $24 u^2$



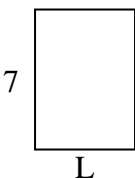
9) Area = $18 u^2$



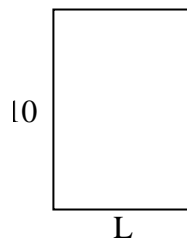
10) Area = $40 u^2$



11) Area = $35 u^2$



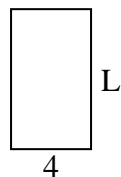
12) Area = $70 u^2$



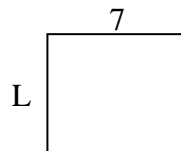
13) Area = $4 u^2$



14) Area = $28 u^2$



15) Area = $42 u^2$



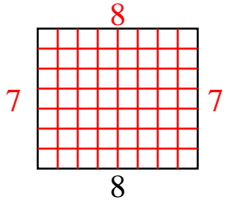
Answers

1. _____
2. _____
3. _____
4. _____
5. _____
6. _____
7. _____
8. _____
9. _____
10. _____
11. _____
12. _____
13. _____
14. _____
15. _____

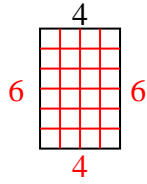


Determine the value of 'L'.

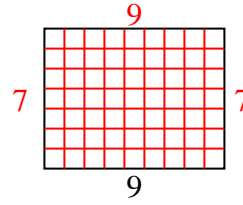
1) Area = $56 u^2$



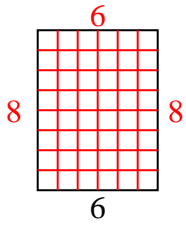
2) Area = $24 u^2$



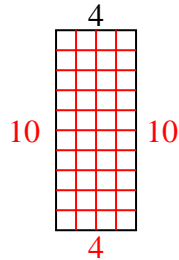
3) Area = $63 u^2$



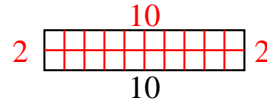
4) Area = $48 u^2$



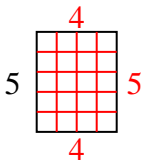
5) Area = $40 u^2$



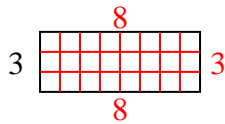
6) Area = $20 u^2$



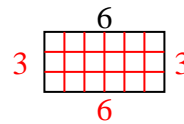
7) Area = $20 u^2$



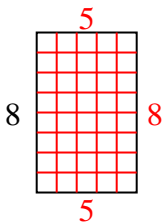
8) Area = $24 u^2$



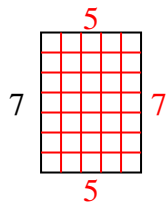
9) Area = $18 u^2$



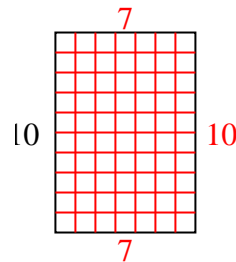
10) Area = $40 u^2$



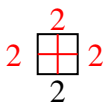
11) Area = $35 u^2$



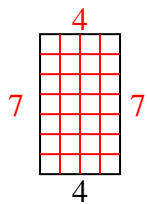
12) Area = $70 u^2$



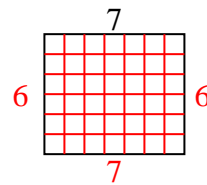
13) Area = $4 u^2$



14) Area = $28 u^2$



15) Area = $42 u^2$



Answers

1. 7

2. 6

3. 7

4. 8

5. 10

6. 2

7. 4

8. 8

9. 3

10. 5

11. 5

12. 7

13. 2

14. 7

15. 6