

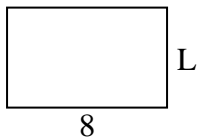


Determine the value of 'L'.

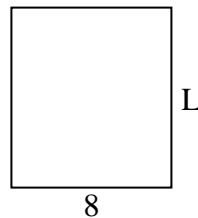
1) Area = $8 u^2$



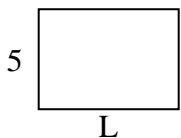
2) Area = $40 u^2$



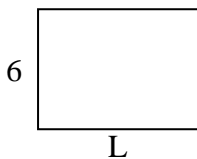
3) Area = $72 u^2$



4) Area = $35 u^2$



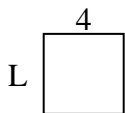
5) Area = $48 u^2$



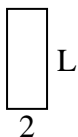
6) Area = $36 u^2$



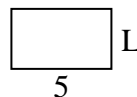
7) Area = $16 u^2$



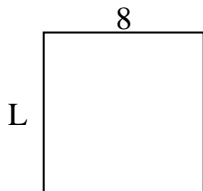
8) Area = $10 u^2$



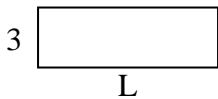
9) Area = $15 u^2$



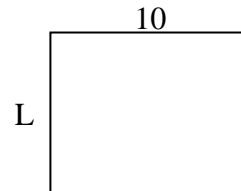
10) Area = $64 u^2$



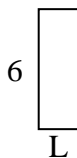
11) Area = $27 u^2$



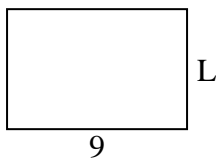
12) Area = $80 u^2$



13) Area = $12 u^2$



14) Area = $54 u^2$



15) Area = $9 u^2$



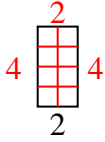
Answers

1. _____
2. _____
3. _____
4. _____
5. _____
6. _____
7. _____
8. _____
9. _____
10. _____
11. _____
12. _____
13. _____
14. _____
15. _____

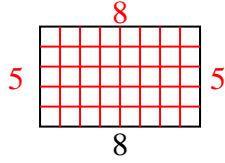


Determine the value of 'L'.

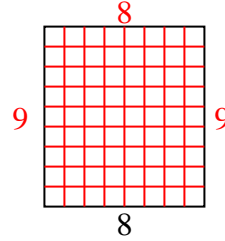
1) Area = $8 u^2$



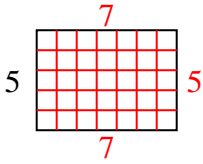
2) Area = $40 u^2$



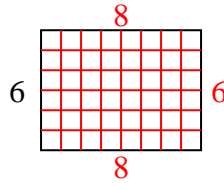
3) Area = $72 u^2$



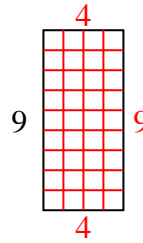
4) Area = $35 u^2$



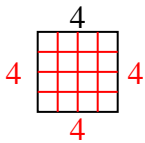
5) Area = $48 u^2$



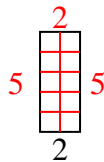
6) Area = $36 u^2$



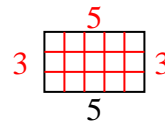
7) Area = $16 u^2$



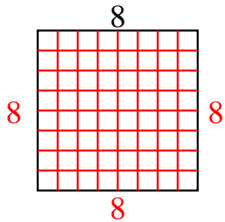
8) Area = $10 u^2$



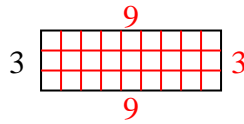
9) Area = $15 u^2$



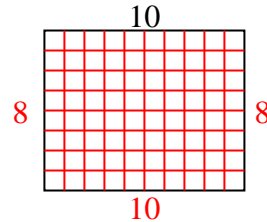
10) Area = $64 u^2$



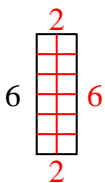
11) Area = $27 u^2$



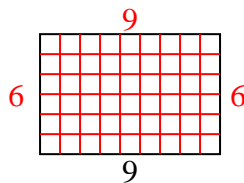
12) Area = $80 u^2$



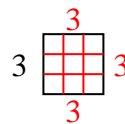
13) Area = $12 u^2$



14) Area = $54 u^2$



15) Area = $9 u^2$



Answers

1. 4
2. 5
3. 9
4. 7
5. 8
6. 4
7. 4
8. 5
9. 3
10. 8
11. 9
12. 8
13. 2
14. 6
15. 3