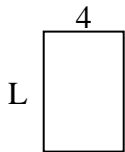


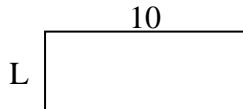


Determine the value of 'L'.

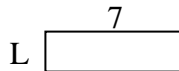
1) Area =  $24 u^2$



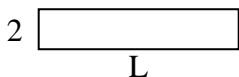
2) Area =  $40 u^2$



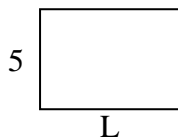
3) Area =  $14 u^2$



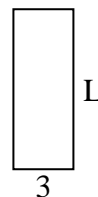
4) Area =  $20 u^2$



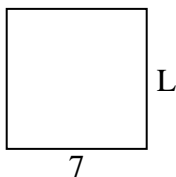
5) Area =  $35 u^2$



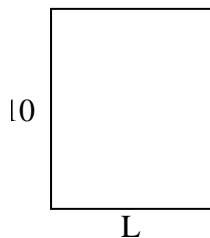
6) Area =  $24 u^2$



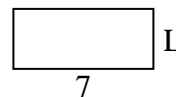
7) Area =  $49 u^2$



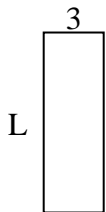
8) Area =  $80 u^2$



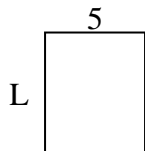
9) Area =  $21 u^2$



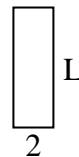
10) Area =  $27 u^2$



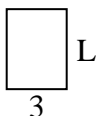
11) Area =  $30 u^2$




12) Area =  $12 u^2$



13) Area =  $12 u^2$



14) Area =  $50 u^2$



15) Area =  $6 u^2$



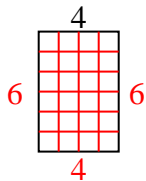
Answers

1. \_\_\_\_\_
2. \_\_\_\_\_
3. \_\_\_\_\_
4. \_\_\_\_\_
5. \_\_\_\_\_
6. \_\_\_\_\_
7. \_\_\_\_\_
8. \_\_\_\_\_
9. \_\_\_\_\_
10. \_\_\_\_\_
11. \_\_\_\_\_
12. \_\_\_\_\_
13. \_\_\_\_\_
14. \_\_\_\_\_
15. \_\_\_\_\_

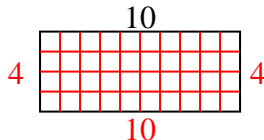


Determine the value of 'L'.

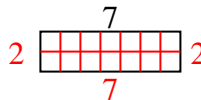
1) Area =  $24 u^2$



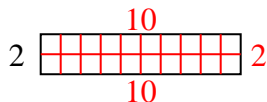
2) Area =  $40 u^2$



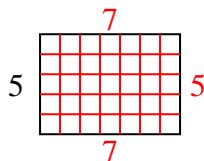
3) Area =  $14 u^2$



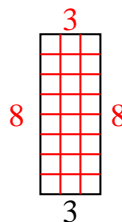
4) Area =  $20 u^2$



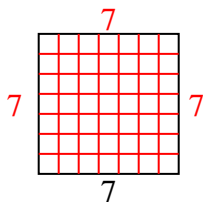
5) Area =  $35 u^2$



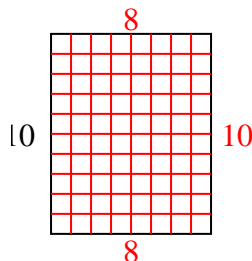
6) Area =  $24 u^2$



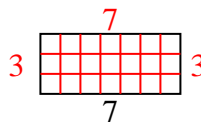
7) Area =  $49 u^2$



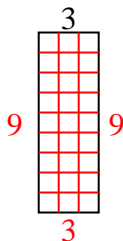
8) Area =  $80 u^2$



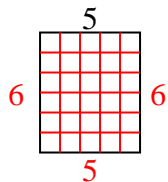
9) Area =  $21 u^2$



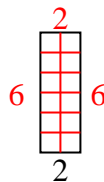
10) Area =  $27 u^2$



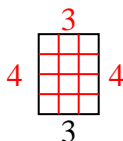
11) Area =  $30 u^2$



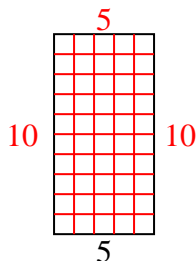
12) Area =  $12 u^2$



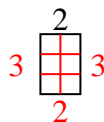
13) Area =  $12 u^2$



14) Area =  $50 u^2$



15) Area =  $6 u^2$



Answers

1. 6

2. 4

3. 2

4. 10

5. 7

6. 8

7. 7

8. 8

9. 3

10. 9

11. 6

12. 6

13. 4

14. 10

15. 3